

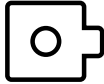
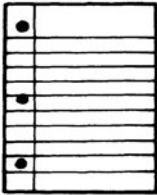

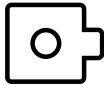



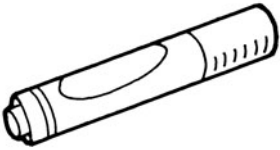




Nonstandard Units

Choose a unit to measure the length.


Write the measure. Circle the unit.

Find the object.	Measure	Unit
1. 	about _____	 
2. 	about _____	 
3. 	about _____	 
4. 	about _____	 

 **Test Prep**

Fill in the ○ for the correct answer. NH means Not Here.

5. Use small paper clips.

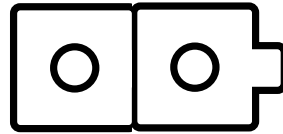



Measure the length of the drawing.

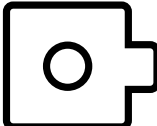
- 
 3 
 4 
 NH
-

Nonstandard Units















You can measure length with different units.



about 2  long

about 2  long

Complete the chart.


Find the object.	Measure with  .	Measure with  .
1. 	about _____ 	about _____ 
2. 	about _____ 	about _____ 
3. 	about _____ 	about _____ 
4. 	about _____ 	about _____ 

Measuring with Paper Clips


Look at each object below.


Estimate the length in  .


Then measure with  .





Estimate: about _____ 


Measure: about _____ 




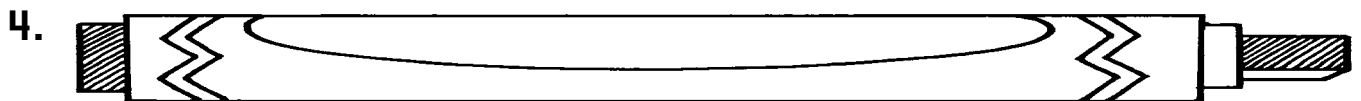
Estimate: about _____ 


Measure: about _____ 



Estimate: about _____ 

Measure: about _____ 



Estimate: about _____ 


Measure: about _____ 

Nonstandard Units


You can measure length with different units.

You can use  as units.

You can use  as units.



The paintbrush is **6** paper clips long.



The paintbrush is **8** cubes long.

Write the number of units.

1. About how many teaspoons long is your kitchen table?

My kitchen table is about _____ teaspoons long.

2. About how many toothpicks long is a pen?

A pen is about _____ toothpicks long.

3. About how many footsteps long is your bed?

My bed is about _____ footsteps long.

4. Measure your bed with a teaspoon. Why is the length different than the length measured with your feet?

Explain here.