



Compare Digital and Analog Clocks


1



2



3



4



5



Directions: 1–5 Cross out the clock that does not show the same time.