


# Reading the Time

Name: \_\_\_\_\_ Date: \_\_\_\_\_


Write the time that each clock is displaying.

(1)



The time is 9:30 .

(2)



The time is \_\_\_\_\_ .

(3)




The time is \_\_\_\_\_ .

(4)



The time is \_\_\_\_\_ .

(5)




The time is \_\_\_\_\_ .

(6)




The time is \_\_\_\_\_ .

(7)




The time is \_\_\_\_\_ .

(8)




The time is \_\_\_\_\_ .

(9)




The time is \_\_\_\_\_ .

(10)




The time is \_\_\_\_\_ .

(11)




The time is \_\_\_\_\_ .

(12)




The time is \_\_\_\_\_ .

(13)




The time is \_\_\_\_\_ .

(14)



The time is \_\_\_\_\_ .

(15)




The time is \_\_\_\_\_ .


# Reading the Time

## ANSWER KEY


Write the time that each clock is displaying.




The time is 9:30.



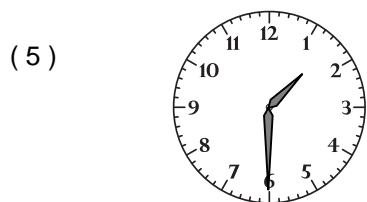
The time is 11:30.




The time is 7:30.




The time is 10:00.



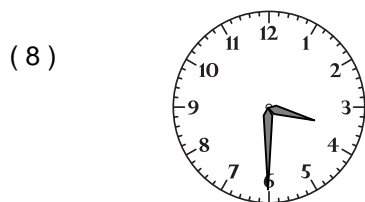
The time is 1:30.




The time is 5:00.




The time is 12:30.



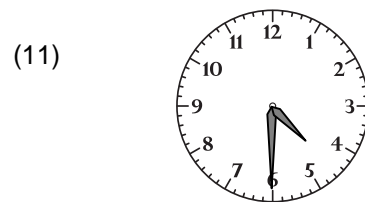
The time is 3:30.




The time is 10:30.




The time is 3:00.




The time is 4:30.




The time is 9:00.



The time is 6:00.



The time is 12:00.



The time is 4:00.