

Reading the Time

Name: _____ Date: _____

Write the time that each clock is displaying.

(1)



The time is 1:30 .

(2)




The time is _____ .

(3)




The time is _____ .

(4)



The time is _____ .

(5)



The time is _____ .

(6)



The time is _____ .

(7)



The time is _____ .

(8)




The time is _____ .

(9)




The time is _____ .

(10)



The time is _____ .

(11)



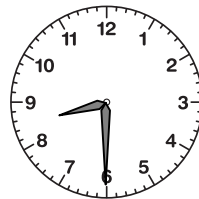
The time is _____ .

(12)



The time is _____ .

(13)



The time is _____ .

(14)



The time is _____ .

(15)

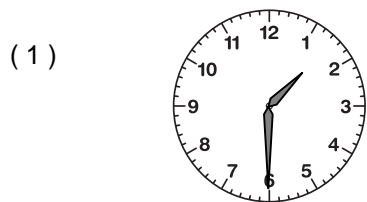


The time is _____ .

Reading the Time

ANSWER KEY


Write the time that each clock is displaying.




The time is 1:30.



The time is 11:00.




The time is 7:00.



The time is 9:30.



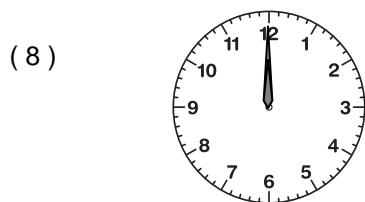
The time is 10:30.



The time is 10:00.



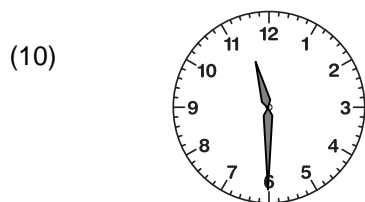
The time is 8:00.



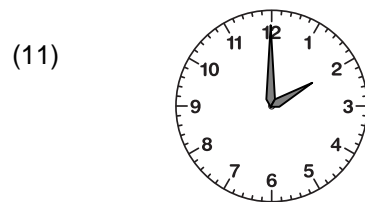
The time is 12:00.



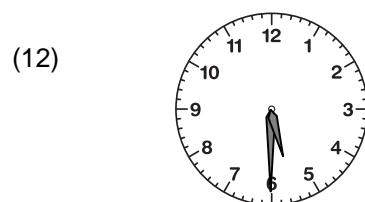
The time is 7:30.



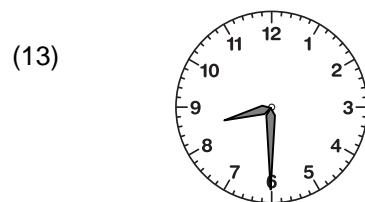
The time is 11:30.



The time is 2:00.



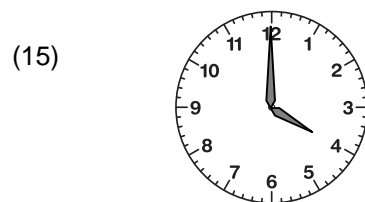
The time is 5:30.



The time is 8:30.



The time is 9:00.



The time is 4:00.