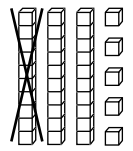
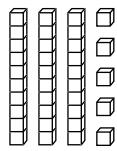
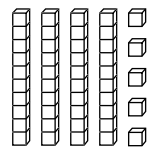


10 More, 10 Less

<p>10 less</p>  <p>2 tens 5 ones 25</p>	<p>start with 35</p>  <p>3 tens 5 ones 35</p>	<p>10 more</p>  <p>4 tens 5 ones 45</p>
---	---	---

Write the number of tens and ones.
Write the number. Then write the number that is 10 more or 10 less.

1. start with 10 more



_____ tens _____ ones = _____



_____ tens _____ ones = _____

2. start with 10 more



_____ tens _____ ones = _____



_____ tens _____ ones = _____

3. start with 10 less



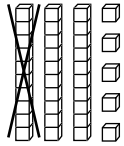
_____ tens _____ ones = _____



_____ tens _____ ones = _____

10 More, 10 Less

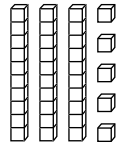
10 less



2 tens 5 ones

25

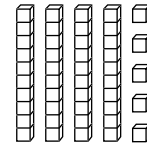
start with 35



3 tens 5 ones

35

10 more



4 tens 5 ones

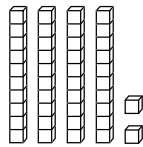
45

Write the number of tens and ones.

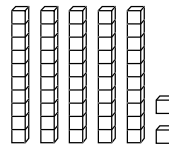
Write the number. Then write the number that is 10 more or 10 less.

1.

start with

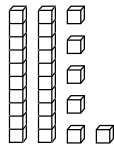
4 tens 2 ones = 42

10 more

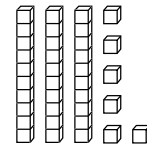
5 tens 2 ones = 52

2.

start with

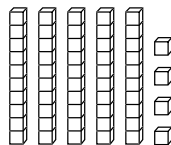
2 tens 6 ones = 26

10 more

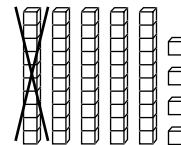
3 tens 6 ones = 36

3.

start with

5 tens 4 ones = 54

10 less

4 tens 4 ones = 44