



Name _____


Subtraction Sentences


Write each subtraction sentence.


1. 
4 - 2 = 2

2. 
_____ - _____ = _____

3. 
_____ - _____ = _____

4. 
_____ - _____ = _____

5. 
_____ - _____ = _____


6. 
_____ - _____ = _____

Number Sense

Write each number.



7. How many faces? _____
How many 😊? _____
How many ☹️? _____



8. How many faces? _____
How many 😊? _____
How many ☹️? _____

Subtraction Sentences

Answer Key

1. $4 - 2 = 2$

2. $5 - 2 = 3$

3. $6 - 2 = 4$

4. $3 - 1 = 2$

5. $5 - 1 = 4$

6. $2 - 1 = 1$

7. 5, 3, 2

8. 6, 4, 2

