

Name _____

Order in Addition

Draw X to show how many.
Write the sum.



1.

$$3 + 1 = \underline{4}$$

$$1 + 3 = \underline{4}$$

2.

$$2 + 4 = \underline{\quad}$$

$$4 + 2 = \underline{\quad}$$

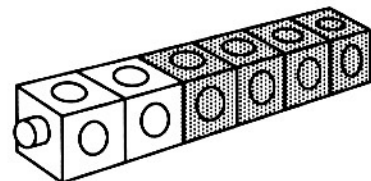
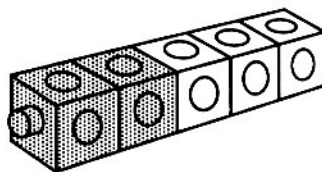
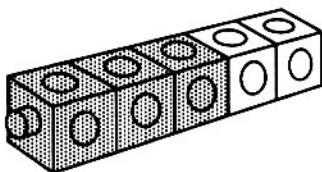
3.

$$4 + 1 = \underline{\quad}$$

$$1 + 4 = \underline{\quad}$$

Reasoning

4. Ring the pair that shows the same number.



Order in Addition

Answer Key

- 1.–3. Check drawings
4. Ring first and middle drawings.

