

Reading the Time

Name: _____ Date: _____


Write the time that each clock is displaying.

(1)



The time is 7:07 .

(2)



The time is _____ .

(3)



The time is _____ .

(4)



The time is _____ .

(5)



The time is _____ .

(6)




The time is _____ .

(7)



The time is _____ .

(8)



The time is _____ .

(9)



The time is _____ .

(10)



The time is _____ .

(11)



The time is _____ .

(12)



The time is _____ .

(13)




The time is _____ .

(14)



The time is _____ .

(15)

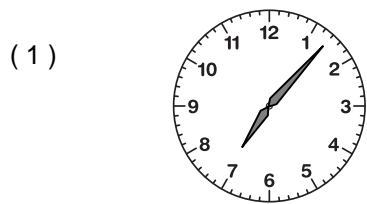


The time is _____ .

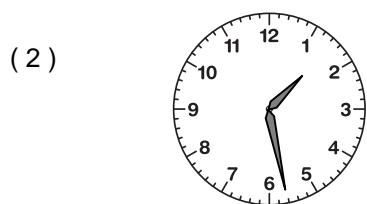
Reading the Time

ANSWER KEY


Write the time that each clock is displaying.




The time is 7:07.




The time is 1:28.



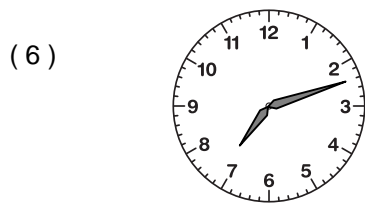
The time is 12:51.




The time is 12:26.




The time is 8:37.



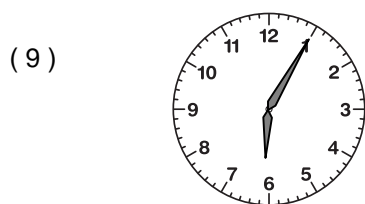
The time is 7:12.




The time is 8:46.



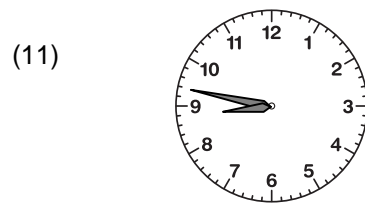
The time is 10:44.




The time is 6:05.



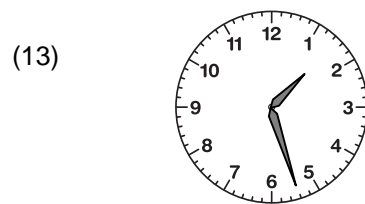
The time is 12:02.



The time is 8:47.



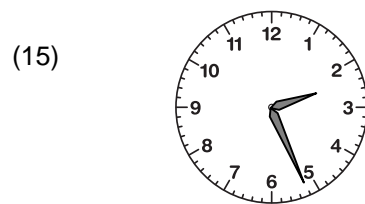
The time is 7:05.



The time is 1:27.



The time is 8:52.



The time is 2:26.