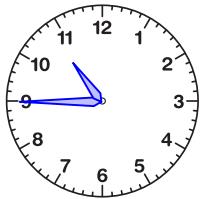


Reading the Time

Name: _____ Date: _____

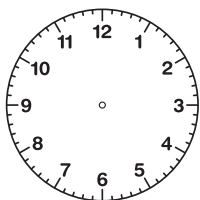
Draw the hands of each clock to show the correct time.

(1)



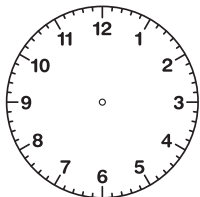
The time is 10:45.

(2)



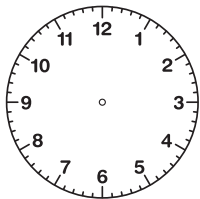
The time is 6:22.

(3)



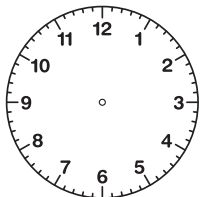
The time is 5:10.

(4)



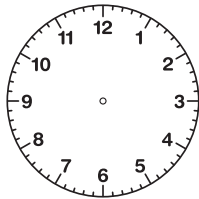
The time is 11:04.

(5)



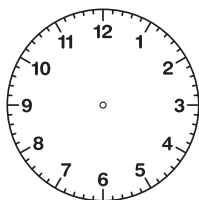
The time is 11:17.

(6)



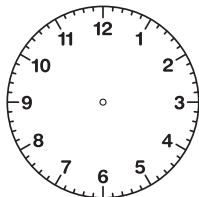
The time is 9:57.

(7)



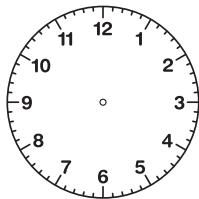
The time is 12:24.

(8)



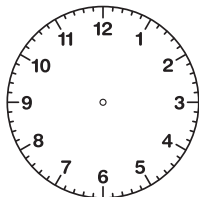
The time is 6:18.

(9)



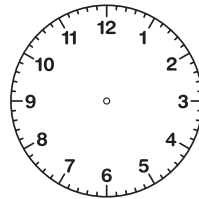
The time is 4:50.

(10)



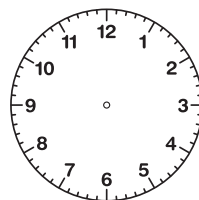
The time is 12:31.

(11)



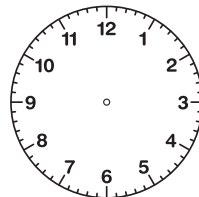
The time is 5:30.

(12)



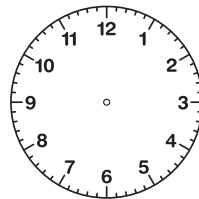
The time is 11:57.

(13)



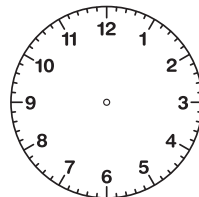
The time is 9:42.

(14)



The time is 4:13.

(15)



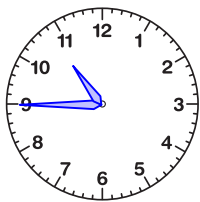
The time is 6:49.

Reading the Time

ANSWER KEY

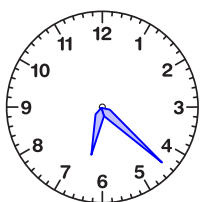
Draw the hands of each clock to show the correct time.

(1)



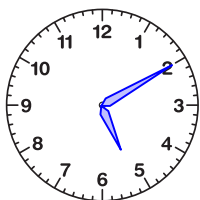
The time is 10:45.

(2)



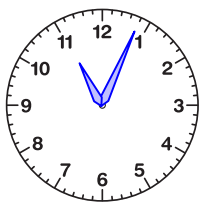
The time is 6:22.

(3)



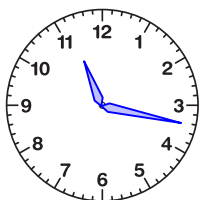
The time is 5:10.

(4)



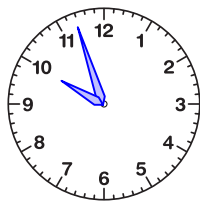
The time is 11:04.

(5)



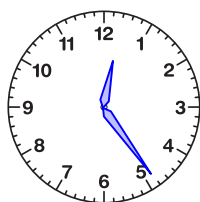
The time is 11:17.

(6)



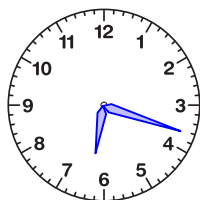
The time is 9:57.

(7)



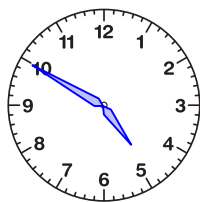
The time is 12:24.

(8)



The time is 6:18.

(9)



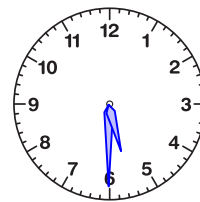
The time is 4:50.

(10)



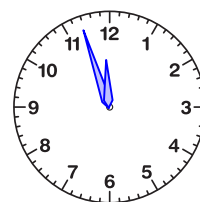
The time is 12:31.

(11)



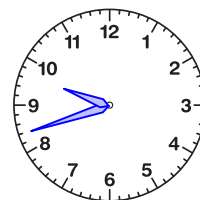
The time is 5:30.

(12)



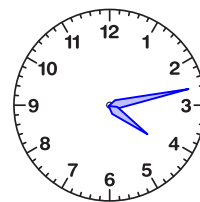
The time is 11:57.

(13)



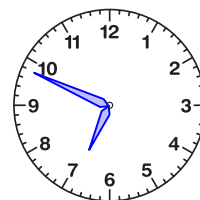
The time is 9:42.

(14)



The time is 4:13.

(15)



The time is 6:49.