

Reading the Time

Name: _____ Date: _____

Write the time that each clock is displaying.

(1)



The time is 2:22 .

(2)



The time is _____ .

(3)



The time is _____ .

(4)




The time is _____ .

(5)



The time is _____ .

(6)



The time is _____ .

(7)




The time is _____ .

(8)



The time is _____ .

(9)



The time is _____ .

(10)



The time is _____ .

(11)



The time is _____ .

(12)



The time is _____ .

(13)



The time is _____ .

(14)



The time is _____ .

(15)

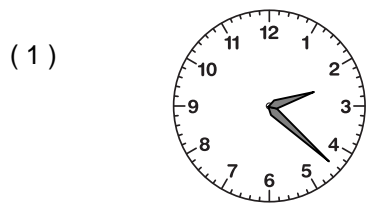


The time is _____ .

Reading the Time

ANSWER KEY

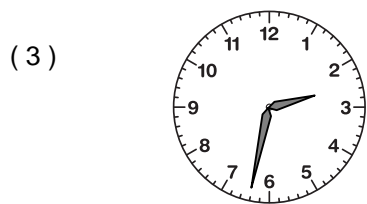
Write the time that each clock is displaying.




The time is 2:22.




The time is 8:53.



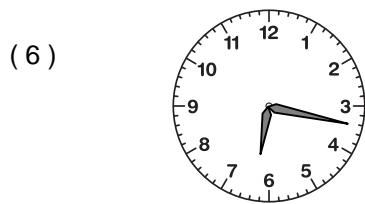
The time is 2:32.




The time is 3:53.



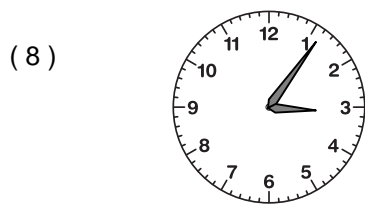
The time is 1:39.



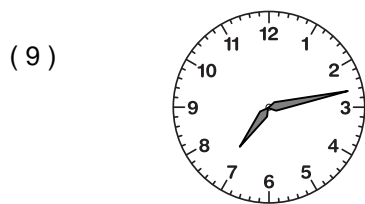
The time is 6:17.



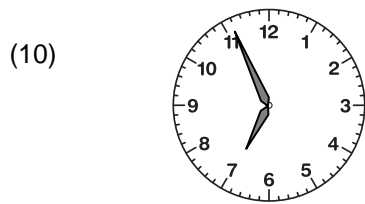
The time is 10:02.




The time is 3:06.




The time is 7:13.



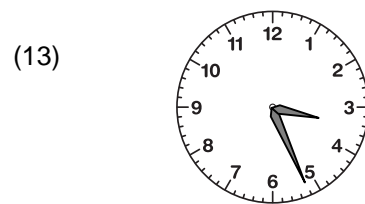
The time is 6:56.



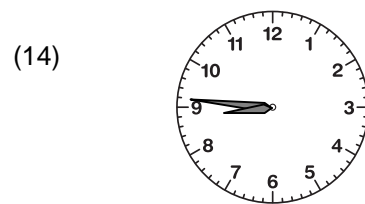
The time is 10:43.




The time is 11:44.



The time is 3:26.



The time is 8:46.



The time is 7:02.