

Reading the Time

Name: _____ Date: _____

Write the time that each clock is displaying.

(1)



The time is 7:18 .

(2)



The time is _____ .

(3)



The time is _____ .

(4)



The time is _____ .

(5)



The time is _____ .

(6)



The time is _____ .

(7)



The time is _____ .

(8)



The time is _____ .

(9)



The time is _____ .

(10)



The time is _____ .

(11)



The time is _____ .

(12)



The time is _____ .

(13)




The time is _____ .

(14)



The time is _____ .

(15)

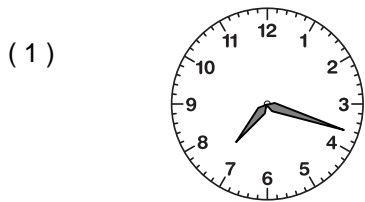


The time is _____ .

Reading the Time

ANSWER KEY

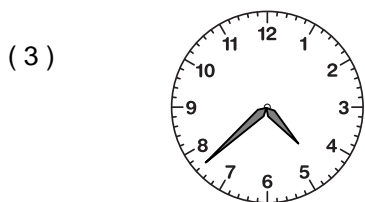
Write the time that each clock is displaying.




The time is 7:18.




The time is 9:27.




The time is 4:38.



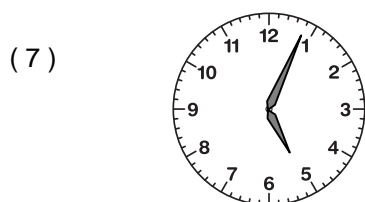
The time is 1:56.



The time is 4:56.



The time is 2:38.



The time is 5:04.




The time is 8:46.



The time is 1:06.




The time is 2:06.




The time is 11:50.




The time is 10:04.



The time is 2:57.



The time is 3:02.



The time is 10:29.