

Reading the Time

Name: _____ Date: _____

Write the time that each clock is displaying.

(1)



The time is 6:07 .

(2)



The time is _____ .

(3)



The time is _____ .

(4)



The time is _____ .

(5)



The time is _____ .

(6)



The time is _____ .

(7)



The time is _____ .

(8)



The time is _____ .

(9)



The time is _____ .

(10)




The time is _____ .

(11)



The time is _____ .

(12)



The time is _____ .

(13)



The time is _____ .

(14)



The time is _____ .

(15)

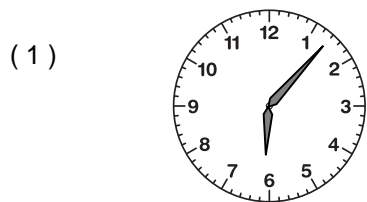


The time is _____ .


Reading the Time

ANSWER KEY


Write the time that each clock is displaying.




The time is 6:07.



The time is 12:26.



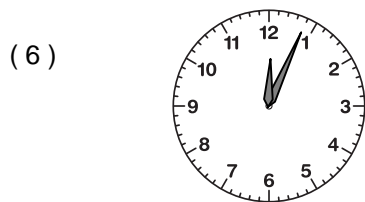
The time is 1:47.



The time is 6:01.



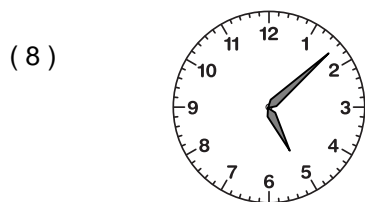
The time is 7:59.




The time is 12:04.



The time is 11:55.




The time is 5:08.



The time is 3:59.




The time is 7:10.



The time is 3:53.




The time is 2:48.



The time is 5:54.



The time is 10:50.



The time is 8:36.