

Reading the Time

Name: _____ Date: _____

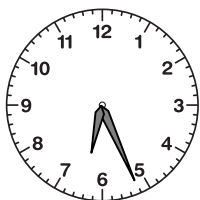
Write the time that each clock is displaying.

(1)



The time is 5:00 .

(2)



The time is _____ .

(3)



The time is _____ .

(4)



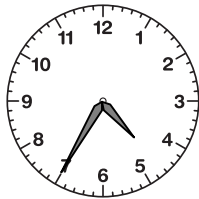
The time is _____ .

(5)



The time is _____ .

(6)



The time is _____ .

(7)



The time is _____ .

(8)



The time is _____ .

(9)



The time is _____ .

(10)



The time is _____ .

(11)



The time is _____ .

(12)




The time is _____ .

(13)



The time is _____ .

(14)



The time is _____ .

(15)




The time is _____ .

Reading the Time

ANSWER KEY


Write the time that each clock is displaying.




The time is 5:00.




The time is 6:26.



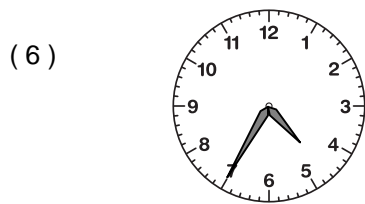
The time is 9:26.



The time is 12:55.



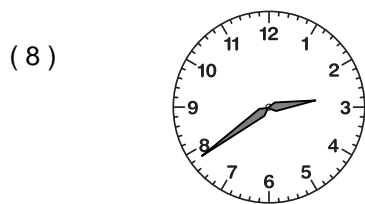
The time is 12:59.



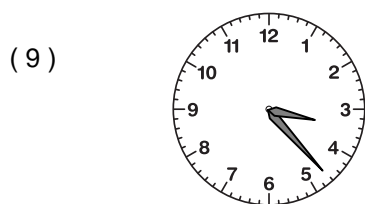
The time is 4:35.



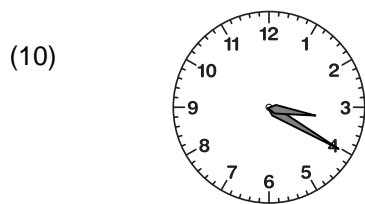
The time is 11:53.




The time is 2:39.




The time is 3:23.




The time is 3:20.




The time is 9:47.




The time is 11:00.



The time is 1:57.



The time is 8:18.



The time is 10:42.