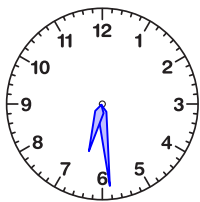


Reading the Time

Name: _____ Date: _____

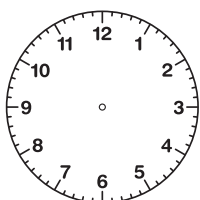
Draw the hands of each clock to show the correct time.

(1)



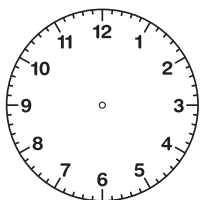
The time is 6:29.

(2)



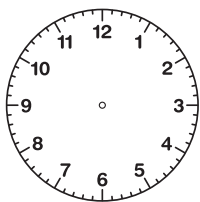
The time is 1:43.

(3)



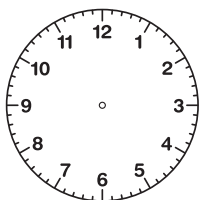
The time is 6:40.

(4)



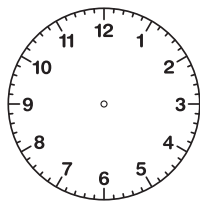
The time is 7:24.

(5)



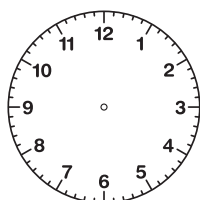
The time is 1:21.

(6)



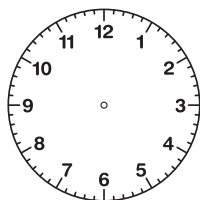
The time is 3:20.

(7)



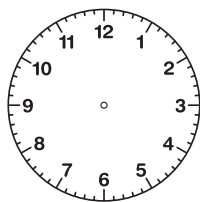
The time is 3:51.

(8)



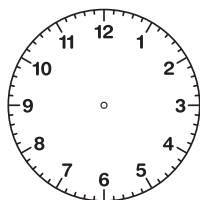
The time is 8:43.

(9)



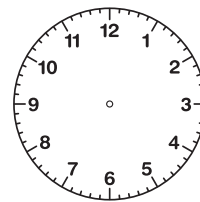
The time is 12:19.

(10)



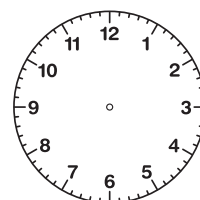
The time is 4:22.

(11)



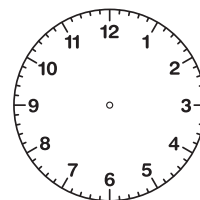
The time is 6:25.

(12)



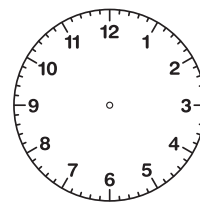
The time is 12:22.

(13)



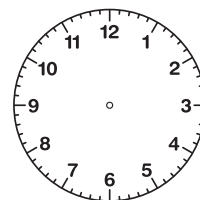
The time is 4:10.

(14)



The time is 1:20.

(15)



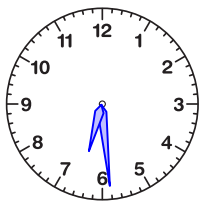
The time is 12:42.

Reading the Time

ANSWER KEY

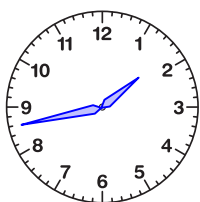
Draw the hands of each clock to show the correct time.

(1)



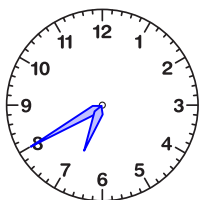
The time is 6:29.

(2)



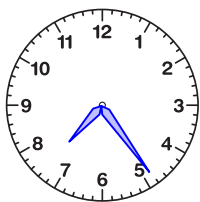
The time is 1:43.

(3)



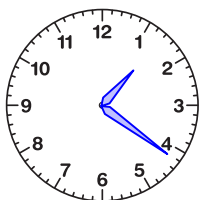
The time is 6:40.

(4)



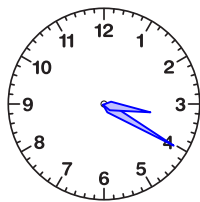
The time is 7:24.

(5)



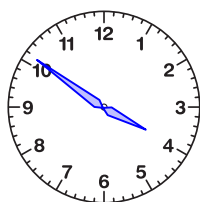
The time is 1:21.

(6)



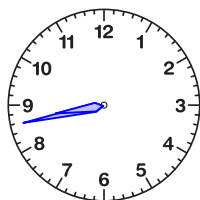
The time is 3:20.

(7)



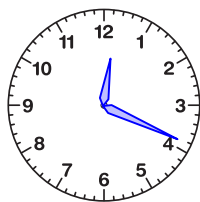
The time is 3:51.

(8)



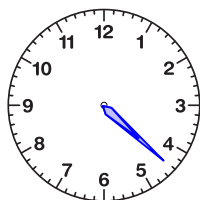
The time is 8:43.

(9)



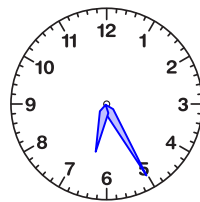
The time is 12:19.

(10)



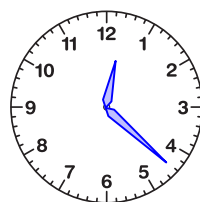
The time is 4:22.

(11)



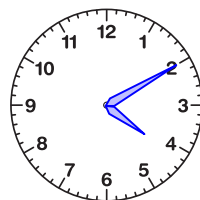
The time is 6:25.

(12)



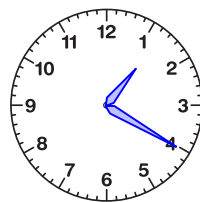
The time is 12:22.

(13)



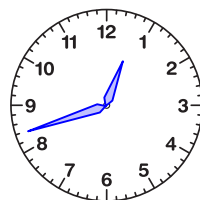
The time is 4:10.

(14)



The time is 1:20.

(15)



The time is 12:42.