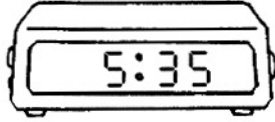


Name \_\_\_\_\_

# DIGITAL TIME


Write the 2 ways you would read each time.

1.




\_\_\_\_\_  
\_\_\_\_\_

2.



\_\_\_\_\_  
\_\_\_\_\_


3.




\_\_\_\_\_  
\_\_\_\_\_

Write the time on the digital clock to show the same time.

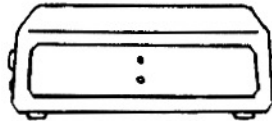
4.




5.



6.

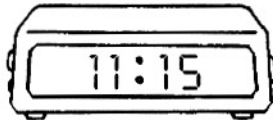


7.




Draw the hour hand on the analog clock to show the same time.


8.



9.



10.



Solve this problem.

11. Ms. Roja's class goes to lunch at 12:00. Thirty minutes later, they go outside for recess. Write the time recess starts. Tell where the hour hand is pointing.

\_\_\_\_\_

# Digital Time

## Answer Key

---

1. five thirty-five; 35 minutes after 5
2. nine fifteen; 15 minutes after 9
3. twelve fifty; 50 minutes after 12
4. 6:45
5. 3:20
6. 11:55
7. 8:15
8. Student draws hour hand to 11.
9. Student draws hour hand to 2 or between 2 and 3.
10. Student draws hour hand to 7.
11. 12:30; 12, or between the 12 and the 1.

