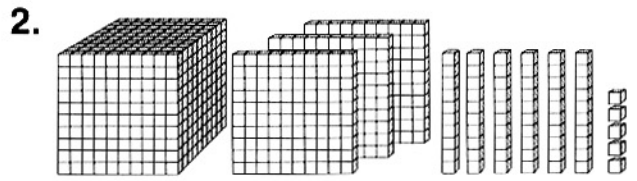
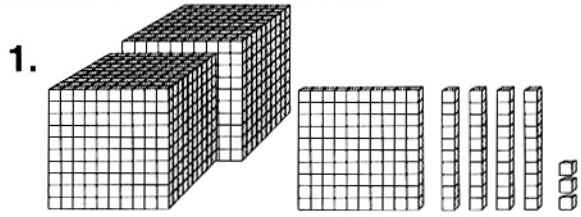


Name \_\_\_\_\_

..... **HOLD THAT PLACE** .....



Write the number.



Write each number in standard form in the place-value chart.

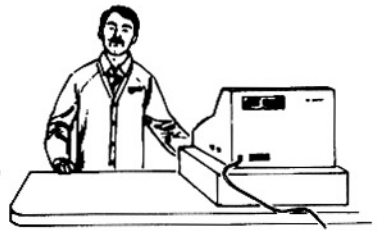
- 3. eighty-seven
- 4. four hundred thirty-two
- 5. nine hundred five
- 6. four thousand, seven hundred seven
- 7. six thousand, twenty-four
- 8. seven thousand, one hundred forty-five
- 9. two thousand, one

Thousands	Hundreds	Tens	Ones

**Real World Connection**

**Solve.**

10. Mr. Huang needs to write a check for one thousand, four hundred twenty-seven dollars. How would the amount be written in standard form?



\_\_\_\_\_

# Hold that Place

## Answer Key

---

1. 2,143
2. 1,365
3. 8 tens, 7 ones
4. 4 hundreds, 3 tens, 2 ones
5. 9 hundreds, 0 tens, 5 ones
6. 4 thousands, 7 hundreds, 0 tens, 7 ones
7. 6 thousands, 0 hundreds, 2 tens, 4 ones
8. 7 thousands, 1 hundred, 4 tens, 5 ones
9. 2 thousands, 0 hundreds, 0 tens, 1 one
10. \$1,427

