



Place Value

Name _____

436 = 4 hundreds, 3 tens and 6 units.

H	T	U
4	0	0
	3	0
		6
4	3	6



H	T	U
<input type="text"/> <input type="text"/> <input type="text"/> <input type="text"/>		

400 + 30 + 6

Write the value of the underlined digit: 436 400 436 6 436 30

251 = ___ hundreds, ___ tens and ___ units.

H	T	U
2	0	0
	5	0
		1
2	5	1

H	T	U
<input type="text"/> <input type="text"/>		

_____ + _____ + _____

Write the value of the underlined digit: 251 _____ 251 _____ 251 _____

327 = ___ hundreds, ___ tens and ___ units.

H	T	U

H	T	U

_____ + _____ + _____

Write the value of the underlined digit: 327 _____ 327 _____ 327 _____

134 = ___ hundreds, ___ tens and ___ units.

H	T	U

H	T	U

_____ + _____ + _____

Write the value of the underlined digit: 134 _____ 134 _____ 134 _____

482 = ___ hundreds, ___ tens and ___ units.

H	T	U

H	T	U

_____ + _____ + _____

Write the value of the underlined digit: 482 _____ 482 _____ 482 _____

696 = ___ hundreds, ___ tens and ___ units.

H	T	U

H	T	U

_____ + _____ + _____

Write the value of the underlined digit: 696 _____ 696 _____ 696 _____

317 = ___ hundreds, ___ tens and ___ units.

H	T	U

H	T	U

_____ + _____ + _____

Write the value of the underlined digit: 317 _____ 317 _____ 317 _____

389 = ___ hundreds, ___ tens and ___ units.

H	T	U

H	T	U

_____ + _____ + _____

Write the value of the underlined digit: 389 _____ 389 _____ 389 _____