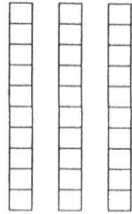

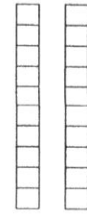


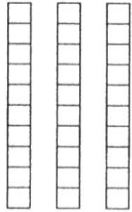
Start with the number shown on each toy.  
 Count on by tens.  
 Write the addition sentence.




\_\_\_\_\_ + \_\_\_\_\_ = \_\_\_\_\_



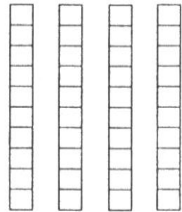
\_\_\_\_\_ + \_\_\_\_\_ = \_\_\_\_\_



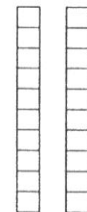
\_\_\_\_\_ + \_\_\_\_\_ = \_\_\_\_\_



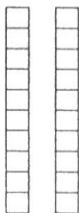
\_\_\_\_\_ + \_\_\_\_\_ = \_\_\_\_\_




\_\_\_\_\_ + \_\_\_\_\_ = \_\_\_\_\_



\_\_\_\_\_ + \_\_\_\_\_ = \_\_\_\_\_



\_\_\_\_\_ + \_\_\_\_\_ = \_\_\_\_\_



\_\_\_\_\_ + \_\_\_\_\_ = \_\_\_\_\_

Name \_\_\_\_\_

2.NBT.5

Sheet B

Add. Trade if you need to.  
You may use tens and ones blocks.

Tens	Ones
4	6
+2	5
<hr/>	

Tens	Ones
5	7
+1	6
<hr/>	

Tens	Ones
4	3
+2	8
<hr/>	

Tens	Ones
4	9
+3	1
<hr/>	

Tens	Ones
6	4
+1	7
<hr/>	

Tens	Ones
4	5
+2	5
<hr/>	

Tens	Ones
1	9
+4	2
<hr/>	

Tens	Ones
3	7
+2	5
<hr/>	

Tens	Ones
5	8
+1	6
<hr/>	

Tens	Ones
3	8
+2	2
<hr/>	

Tens	Ones
4	1
+3	6
<hr/>	

Tens	Ones
4	3
+1	7
<hr/>	

Tens	Ones
4	3
+4	5
<hr/>	

Tens	Ones
2	6
+1	6
<hr/>	

Tens	Ones
3	9
+1	2
<hr/>	

Tens	Ones
4	3
+1	7
<hr/>	