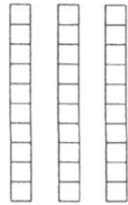


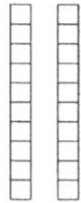
Start with the number given.
 Count back by tens.
 Write the subtraction sentence.



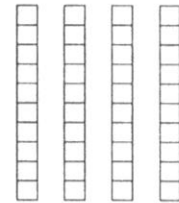
$$\underline{75} - \underline{30} = \underline{45}$$



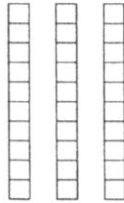
$$\underline{\quad} - \underline{\quad} = \underline{\quad}$$



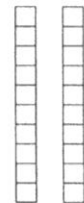
$$\underline{\quad} - \underline{\quad} = \underline{\quad}$$



$$\underline{\quad} - \underline{\quad} = \underline{\quad}$$



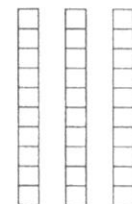
$$\underline{\quad} - \underline{\quad} = \underline{\quad}$$



$$\underline{\quad} - \underline{\quad} = \underline{\quad}$$



$$\underline{\quad} - \underline{\quad} = \underline{\quad}$$



$$\underline{\quad} - \underline{\quad} = \underline{\quad}$$

Subtract. Trade if you need to.
You may use tens and ones blocks.

Tens	Ones
3	11
4	1
-2	7
1	4

Trade? Yes No

Tens	Ones
6	2
-2	5

Trade? Yes No

Tens	Ones
2	9
-1	6

Trade? Yes No

Tens	Ones
6	4
-2	7

Trade? Yes No

Tens	Ones
3	4
-1	9

Trade? Yes No

Tens	Ones
6	1
-2	3

Trade? Yes No

Tens	Ones
5	2
-2	7

Trade? Yes No

Tens	Ones
5	4
-1	8

Trade? Yes No