


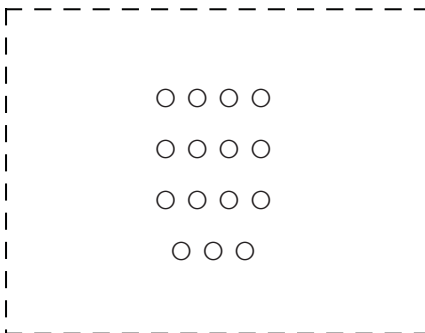


Determine if the number of shapes in the box is even or odd.


1)



2)




3)




4)



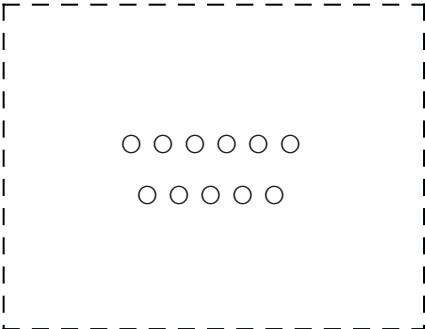
5)




6)




7)




8)



9)



10)



Answers

1. \_\_\_\_\_

2. \_\_\_\_\_

3. \_\_\_\_\_

4. \_\_\_\_\_

5. \_\_\_\_\_

6. \_\_\_\_\_

7. \_\_\_\_\_

8. \_\_\_\_\_

9. \_\_\_\_\_

10. \_\_\_\_\_



Determine if the number of shapes in the box is even or odd.

1) **20**

2) **15**

3) **18**

4) **12**

5) **14**

6) **6**

7) **11**

8) **10**

9) **7**

10) **9**

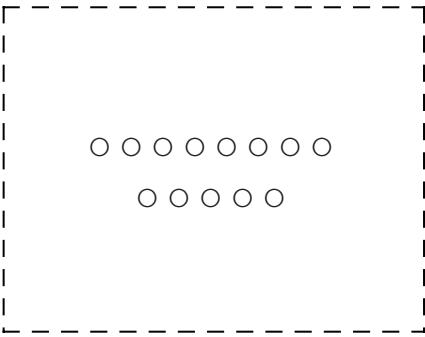
Answers

1. Even
2. Odd
3. Even
4. Even
5. Even
6. Even
7. Odd
8. Even
9. Odd
10. Odd




Determine if the number of shapes in the box is even or odd.


1)



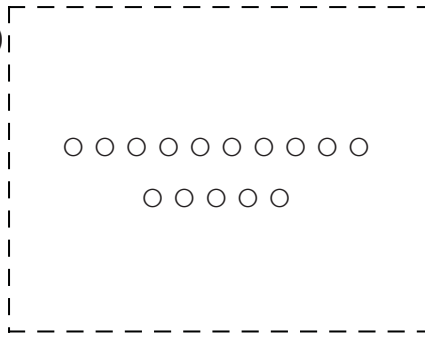
2)




3)



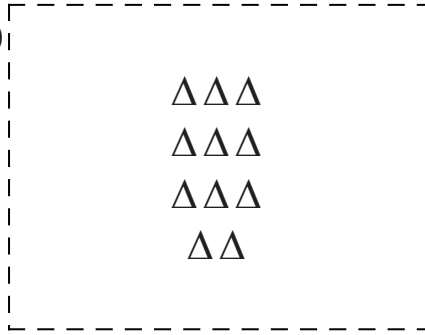
4)



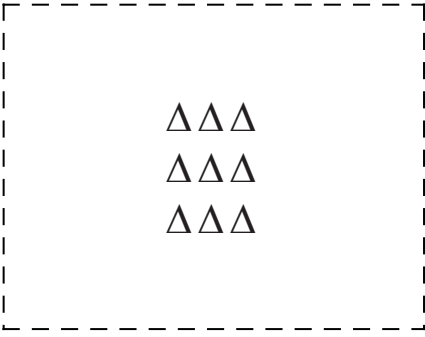
5)




6)



7)




8)



9)



10)



Answers

1. \_\_\_\_\_
2. \_\_\_\_\_
3. \_\_\_\_\_
4. \_\_\_\_\_
5. \_\_\_\_\_
6. \_\_\_\_\_
7. \_\_\_\_\_
8. \_\_\_\_\_
9. \_\_\_\_\_
10. \_\_\_\_\_



Determine if the number of shapes in the box is even or odd.

1) **13**

2) **7**

3) **14**

4) **15**

5) **10**

6) **11**

7) **9**

8) **20**

9) **16**

10) **6**

Answers

1. Odd

2. Odd

3. Even

4. Odd

5. Even

6. Odd

7. Odd

8. Even


9. Even

10. Even




Determine if the number of shapes in the box is even or odd.

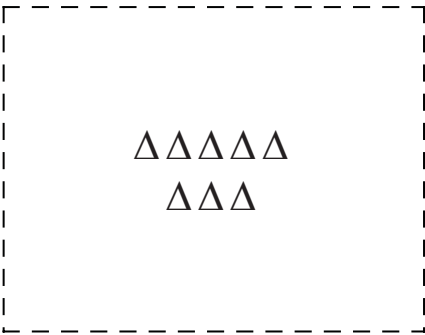
1)




2)



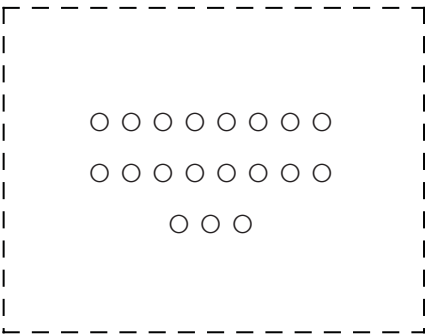
3)




4)



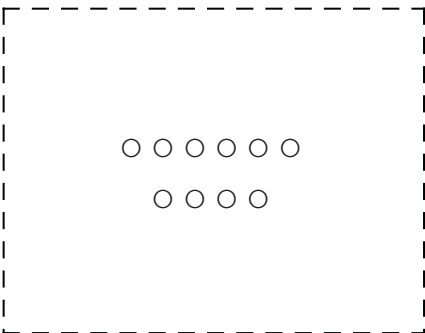
5)




6)




7)




8)



9)



10)



Answers

1. \_\_\_\_\_
2. \_\_\_\_\_
3. \_\_\_\_\_
4. \_\_\_\_\_
5. \_\_\_\_\_
6. \_\_\_\_\_
7. \_\_\_\_\_
8. \_\_\_\_\_
9. \_\_\_\_\_
10. \_\_\_\_\_



Determine if the number of shapes in the box is even or odd.

1) **9**

2) **13**

3) **8**

4) **11**

5) **19**

6) **16**

7) **10**

8) **15**

9) **20**

10) **17**

Answers

1. Odd

2. Odd

3. Even

4. Odd

5. Odd

6. Even

7. Even

8. Odd

9. Even

10. Odd



Determine if the number of shapes in the box is even or odd.

Answers

1)

2)

3)

4)

5)

6)

7)

8)

9)

10)

1. \_\_\_\_\_
2. \_\_\_\_\_
3. \_\_\_\_\_
4. \_\_\_\_\_
5. \_\_\_\_\_
6. \_\_\_\_\_
7. \_\_\_\_\_
8. \_\_\_\_\_
9. \_\_\_\_\_
10. \_\_\_\_\_



Determine if the number of shapes in the box is even or odd.

1) **14**

2) **6**

3) **15**

4) **8**

5) **16**

6) **11**

7) **13**

8) **12**

9) **20**

10) **9**

Answers

1. Even

2. Even

3. Odd

4. Even

5. Even

6. Odd

7. Odd

8. Even


9. Even


10. Odd







Determine if the number of shapes in the box is even or odd.


1) 


2) 


3) 

4) 


5) 

6) 

7) 

8) 

9) 


10) 


Answers


1. \_\_\_\_\_
2. \_\_\_\_\_
3. \_\_\_\_\_
4. \_\_\_\_\_
5. \_\_\_\_\_
6. \_\_\_\_\_
7. \_\_\_\_\_
8. \_\_\_\_\_
9. \_\_\_\_\_
10. \_\_\_\_\_




Determine if the number of shapes in the box is even or odd.


1)  **14**


2)  **15**


3)  **20**

4)  **13**

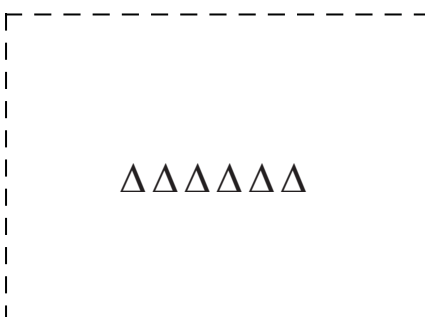
5)  **18**

6)  **9**

7)  **17**

8)  **11**

9)  **7**

10)  **6**

Answers

1. Even
2. Odd
3. Even
4. Odd
5. Even
6. Odd
7. Odd
8. Odd
9. Odd
10. Even



Determine if the number of shapes in the box is even or odd.

Answers

1)

2)

3)

4)

5)

6)

7)

8)


9)


10)

1. \_\_\_\_\_
2. \_\_\_\_\_
3. \_\_\_\_\_
4. \_\_\_\_\_
5. \_\_\_\_\_
6. \_\_\_\_\_
7. \_\_\_\_\_
8. \_\_\_\_\_
9. \_\_\_\_\_
10. \_\_\_\_\_




Determine if the number of shapes in the box is even or odd.

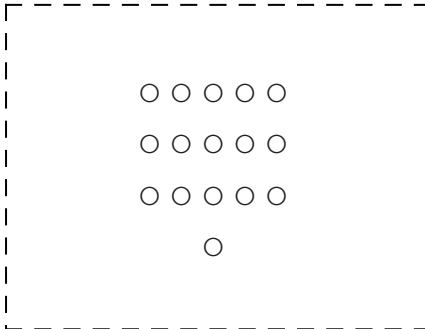
1)  **20**

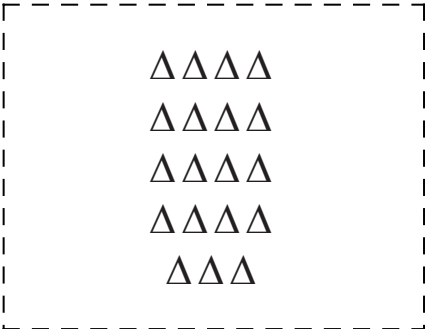
2)  **18**


3)  **8**


4)  **6**


5)  **13**

6)  **16**

7)  **19**

8)  **12**

9)  **17**

10)  **14**

Answers

1. Even

2. Even

3. Even

4. Even

5. Odd

6. Even

7. Odd

8. Even


9. Odd

10. Even




Determine if the number of shapes in the box is even or odd.

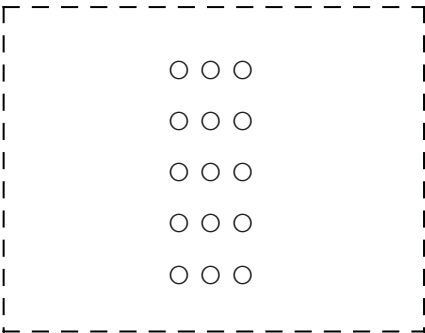
1)




2)




3)



4)




5)



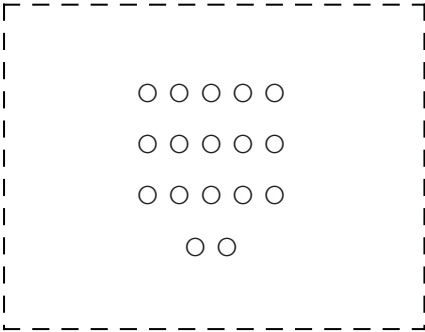
6)



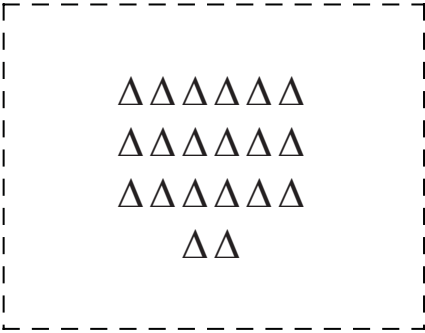
7)




8)



9)



10)



Answers

1. \_\_\_\_\_

2. \_\_\_\_\_

3. \_\_\_\_\_

4. \_\_\_\_\_

5. \_\_\_\_\_

6. \_\_\_\_\_

7. \_\_\_\_\_


8. \_\_\_\_\_

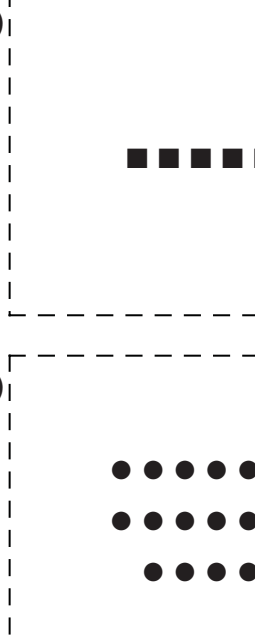
9. \_\_\_\_\_


10. \_\_\_\_\_

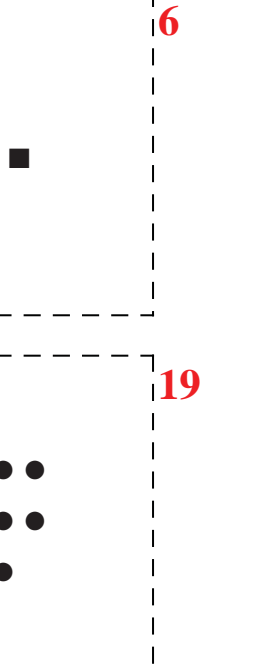


Determine if the number of shapes in the box is even or odd.

1)  **11**

2)  **7**

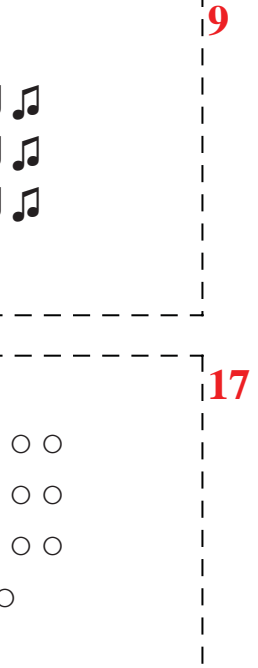
3)  **15**

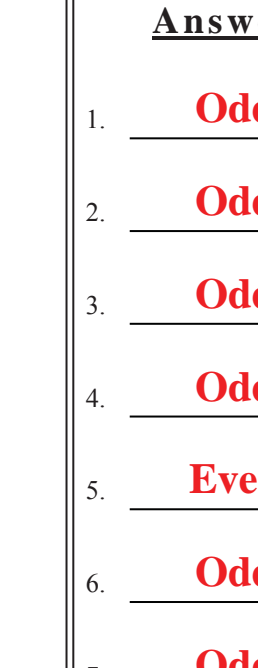
4)  **13**


5)  **6**

6)  **9**

7)  **19**

8)  **17**

9)  **20**

10)  **16**

Answers

1. Odd

2. Odd

3. Odd

4. Odd

5. Even

6. Odd

7. Odd

8. Odd

9. Even

10. Even



Determine if the number of shapes in the box is even or odd.

1)

2)

3)

4)

5)

6)

7)

8)

9)

10)

Answers

1. \_\_\_\_\_
2. \_\_\_\_\_
3. \_\_\_\_\_
4. \_\_\_\_\_
5. \_\_\_\_\_
6. \_\_\_\_\_
7. \_\_\_\_\_
8. \_\_\_\_\_
9. \_\_\_\_\_
10. \_\_\_\_\_



Determine if the number of shapes in the box is even or odd.

1) **15**

2) **6**

3) **10**

4) **8**

5) **12**

6) **7**

7) **16**

8) **20**

9) **17**

10) **9**

Answers

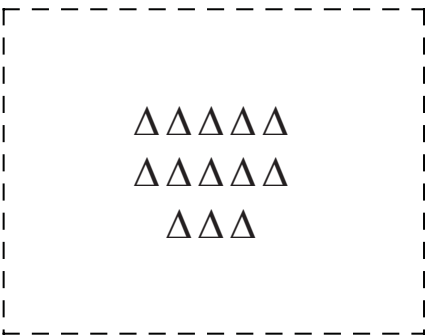
1. Odd
2. Even
3. Even
4. Even
5. Even
6. Odd
7. Even
8. Even
9. Odd
10. Odd






Determine if the number of shapes in the box is even or odd.


1)



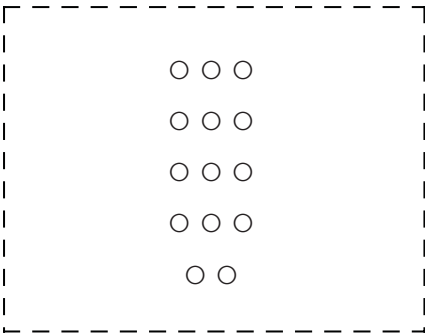
2)




3)




4)




5)




6)



7)




8)



9)



10)



Answers

1. \_\_\_\_\_
2. \_\_\_\_\_
3. \_\_\_\_\_
4. \_\_\_\_\_
5. \_\_\_\_\_
6. \_\_\_\_\_
7. \_\_\_\_\_
8. \_\_\_\_\_
9. \_\_\_\_\_
10. \_\_\_\_\_



Determine if the number of shapes in the box is even or odd.

1) **13**

2) **17**

3) **15**

4) **14**

5) **8**

6) **6**

7) **7**

8) **10**

9) **20**

10) **18**

Answers

1. Odd

2. Odd

3. Odd

4. Even

5. Even

6. Even

7. Odd

8. Even

9. Even

10. Even




Determine if the number of shapes in the box is even or odd.

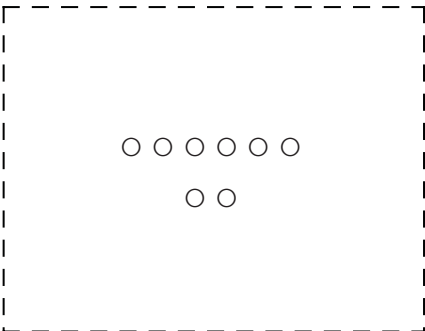
1)



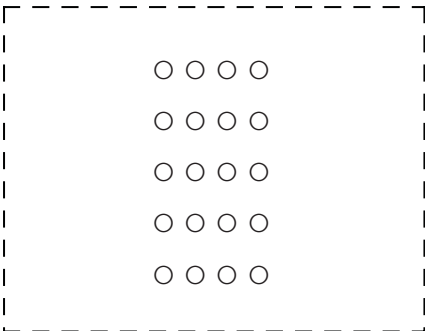
2)




3)




4)




5)




6)




7)



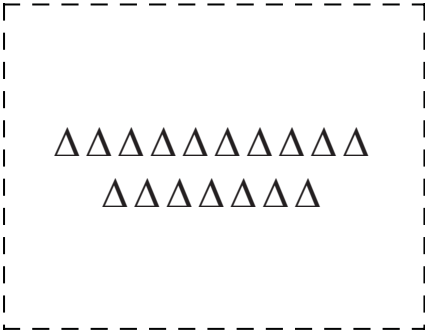
8)



9)



10)



Answers

1. \_\_\_\_\_

2. \_\_\_\_\_

3. \_\_\_\_\_

4. \_\_\_\_\_

5. \_\_\_\_\_

6. \_\_\_\_\_

7. \_\_\_\_\_


8. \_\_\_\_\_


9. \_\_\_\_\_

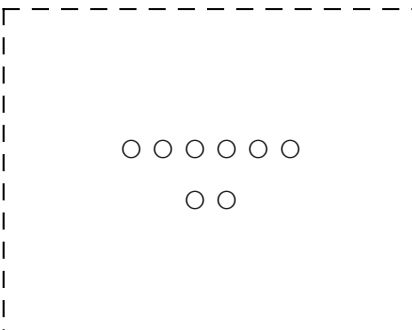
10. \_\_\_\_\_

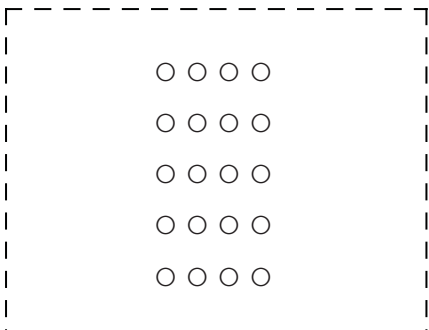


Determine if the number of shapes in the box is even or odd.


1)  **11**

2)  **10**


3)  **8**

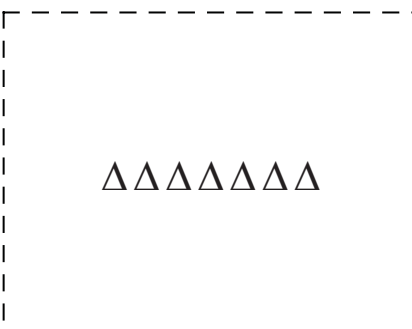
4)  **20**

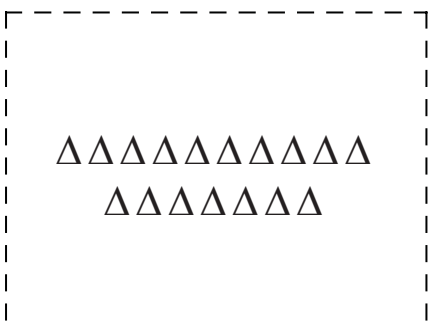
5)  **6**

6)  **13**

7)  **18**

8)  **12**

9)  **7**

10)  **17**

Answers

1. Odd

2. Even

3. Even

4. Even

5. Even

6. Odd

7. Even

8. Even

9. Odd

10. Odd