

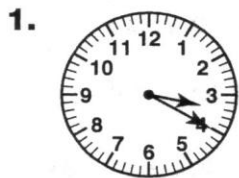
Name _____

3.MD.1

Telling Time to the Minute

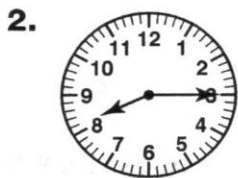
SKILLS

Read the time shown on each clock. Write the time two ways.



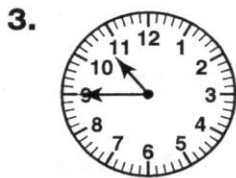
_____ minutes

past _____



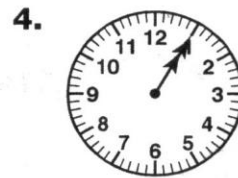
_____ minutes

past _____



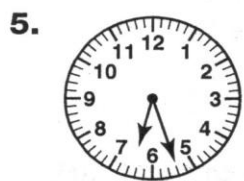
_____ minutes

past _____



_____ minutes

past _____



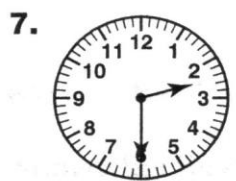
_____ minutes

past _____



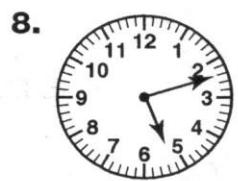
_____ minutes

past _____



_____ minutes

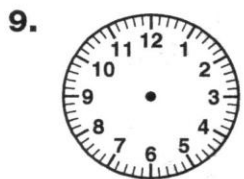
past _____



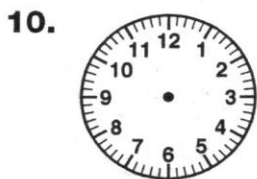
_____ minutes

past _____

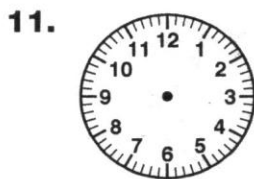
Draw the hands on each clock so that the clock shows the time given.



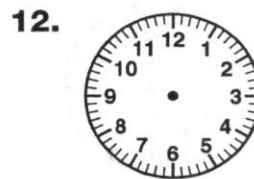
1:30



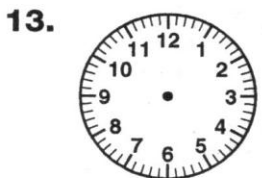
4:15



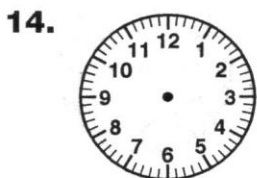
6:20



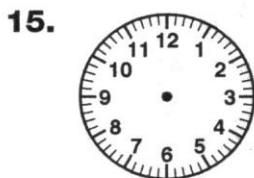
10:40



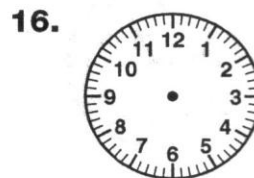
3:16



5:56



12:38



2:29

Name _____

3.MD.1

Telling Time to the Minute

CRITICAL THINKING AND PROBLEM SOLVING

17. Soccer practice starts at 6:15. The clock shows the time that you got to practice. What time did you get there? Were you early or late?

You got to practice at _____. You were EARLY LATE.



18. School starts at 8:35. Your bus arrived at the time shown on the clock. What time did you arrive? Were you early or late?

You arrived at _____. You were EARLY LATE.



19. You were supposed to be home for dinner at 5:45. The clock shows the time that you got home. What time did you get home? Were you early or late?

You got to home at _____. You were EARLY LATE.



20. The movie started at 7:35. The clock shows the time you arrived. What time did you arrive? How many minutes of the movie did you miss?

You arrived at _____. You missed _____ minutes.



Circle the clock which shows the indicated times.

21. 3:35



22. 6:00



23. 9:15



24. 2:55

