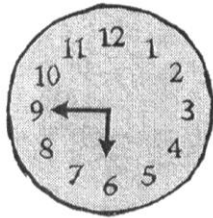





Name _____

3.MD.1

Sheet A

Match each standard clock with the digital clock that shows the same time.



10:45

4:30

1:15

6:45


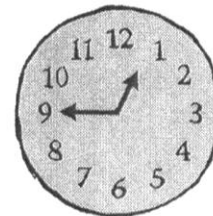


Match each digital clock to the standard clock that shows **15 minutes later**.


4:15

3:45

7:00

12:30






The clock shows the time Alana's train was due.
The time can be written two ways.

45 minutes after 3


OR 3:45.

Write each time two ways.




_____ minutes after _____

OR _____




_____ minutes after _____

OR _____




_____ minutes after _____

OR _____




_____ minutes after _____

OR _____



_____ minutes after _____

OR _____



_____ minutes after _____

OR _____