




Name \_\_\_\_\_


# COUNT BY 5's

Count by 5's to show the minutes that have passed from the first clock to the second.

1.   
5, \_\_\_\_\_, \_\_\_\_\_, \_\_\_\_\_, \_\_\_\_\_

2.   
5, \_\_\_\_\_, \_\_\_\_\_, \_\_\_\_\_




3.   
5, \_\_\_\_\_, \_\_\_\_\_, \_\_\_\_\_, \_\_\_\_\_, \_\_\_\_\_

4.   
5, \_\_\_\_\_, \_\_\_\_\_, \_\_\_\_\_

Write the time 10 minutes later.



Draw the hands on each analog clock to match the time shown on the digital clock.



# Count by 5's

## Answer Key

---

1. 10, 15, 20, 25
2. 10, 15, 20
3. 10, 15, 20, 25, 30
4. 10, 15, 20
5. 4:35
6. 7:40
7. 3:25
8. Student draws hour hand to 4 (or between 4 and 5), minute hand to 5.
9. Student draws hour hand to 1 (or between 1 and 2), minute hand to 11.
10. Student draws hour hand to 9, minute hand to 2.

