


Name \_\_\_\_\_

# COUNT THE MINUTES


Count by 5's to show the minutes that have passed from the first clock to the second clock.

1.




5, \_\_\_\_\_, \_\_\_\_\_

2.




5, \_\_\_\_\_, \_\_\_\_\_, \_\_\_\_\_

3.



5, \_\_\_\_\_

4.



5, \_\_\_\_\_, \_\_\_\_\_, \_\_\_\_\_, \_\_\_\_\_, \_\_\_\_\_

Write the time 5 minutes later.

5.



\_\_\_\_\_

6.



\_\_\_\_\_

7.



\_\_\_\_\_

Solve this problem.

8. Lisa and Erin started jumping rope at 2:45. They jumped for 30 minutes. At what time did they stop jumping rope?

\_\_\_\_\_



# Count the Minutes

## Answer Key

---

1. 10, 15
2. 10, 15, 20
3. 10
4. 10, 15, 20, 25, 30
5. 6:35
6. 4:00
7. 6:15
8. 3:15

