


Name _____

3.NF.3c

Write fractions for the parts that are shaded.



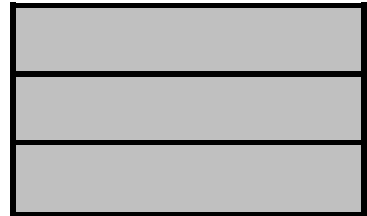
_____ or _____



_____ or _____




_____ or _____




_____ or _____

Color 1 whole




Fractions = _____ or _____

Color 1 whole



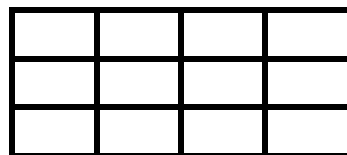
Fractions = _____ or _____

Color 1 whole



Fractions = _____ or _____

Color 1 whole



Fractions = _____ or _____

What is 3 in fraction form? _____

What is $\frac{9}{9}$ equal to? _____

9

What is $\frac{2}{2}$ equal to? _____

2

What is 5 in fraction form? _____

What is $\frac{12}{12}$ equal to? _____

12

What is $\frac{7}{7}$ equal to? _____

7

What is $\frac{16}{16}$ equal to? _____

16

Write fractions that are equal to 1.

Label the points on the number lines,
by starting at 0 and finishing at 1 whole.

