

Multiplying by 0, 1, 2, 3, and 4

SKILLS

Find each product.

$$\begin{array}{r} 1. \quad 5 \\ \times 1 \\ \hline \end{array}$$

$$\begin{array}{r} 2. \quad 7 \\ \times 0 \\ \hline \end{array}$$

$$\begin{array}{r} 3. \quad 12 \\ \times 1 \\ \hline \end{array}$$

$$\begin{array}{r} 4. \quad 19 \\ \times 0 \\ \hline \end{array}$$

$$\begin{array}{r} 5. \quad 9 \\ \times 1 \\ \hline \end{array}$$


$$\begin{array}{r} 6. \quad 25 \\ \times 0 \\ \hline \end{array}$$

$$\begin{array}{r} 7. \quad 300 \\ \times 1 \\ \hline \end{array}$$


$$\begin{array}{r} 8. \quad 555 \\ \times 0 \\ \hline \end{array}$$

Find each product by coloring squares.


$$\begin{array}{r} 9. \quad 2 \\ \times 6 \\ \hline \end{array}$$



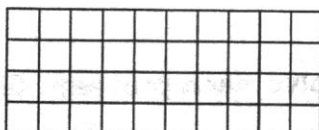
$$\begin{array}{r} 10. \quad 3 \\ \times 4 \\ \hline \end{array}$$




$$\begin{array}{r} 11. \quad 4 \\ \times 9 \\ \hline \end{array}$$



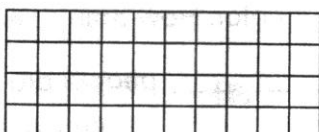
$$\begin{array}{r} 12. \quad 3 \\ \times 9 \\ \hline \end{array}$$




$$\begin{array}{r} 13. \quad 4 \\ \times 7 \\ \hline \end{array}$$



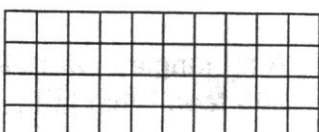
$$\begin{array}{r} 14. \quad 3 \\ \times 5 \\ \hline \end{array}$$



$$\begin{array}{r} 15. \quad 2 \\ \times 9 \\ \hline \end{array}$$



$$\begin{array}{r} 16. \quad 3 \\ \times 6 \\ \hline \end{array}$$



Find each product.

$$17. \quad 4 \times 3 = \underline{\quad}$$

$$18. \quad 2 \times 9 = \underline{\quad}$$

$$19. \quad 3 \times 7 = \underline{\quad}$$

$$20. \quad 2 \times 8 = \underline{\quad}$$

$$21. \quad 3 \times 2 = \underline{\quad}$$

$$22. \quad 4 \times 6 = \underline{\quad}$$

$$23. \quad 4 \times 4 = \underline{\quad}$$

$$24. \quad 4 \times 5 = \underline{\quad}$$

$$25. \quad 4 \times 2 = \underline{\quad}$$