




Points, Lines, and Rays

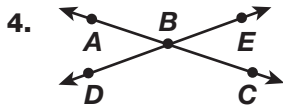
Name each figure.

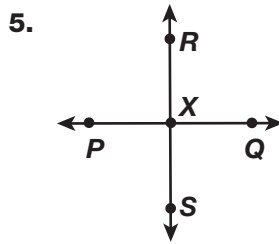


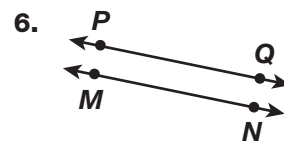




Describe each pair of lines. Use symbols if possible.







Draw and label each figure.

7. plane ABC

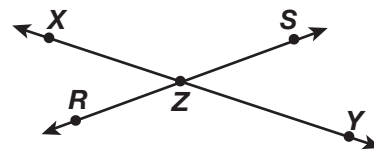
8. \overleftrightarrow{UV}

9. $\overline{AB} \parallel \overline{CD}$

Test Prep

10. For which of the three figures—a line, a line segment, and a ray—can the letters be written in any order?

11. Which of the following describes the figure?



A $XY \parallel RS$

C XY and RS are rays

B $XY \perp RS$

D XY and RS are intersecting lines