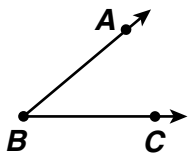
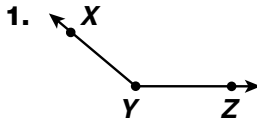


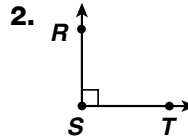
Rays and Angles

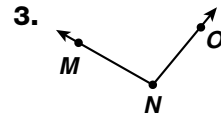
Name each angle in three ways. Then classify the angle as *acute*, *obtuse*, *right*, or *straight*.

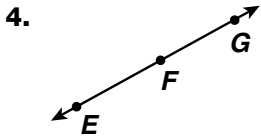


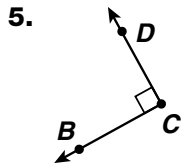
$\angle B$, $\angle ABC$,
 $\angle CBA$
 The angle is acute.

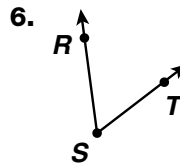


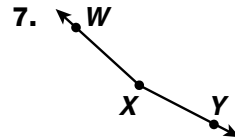












Problem Solving

8. Merideth and Luis both started at the same spot. They walked away from each other in opposite directions. They stayed on the same line. What angle did their paths form? Explain how you know.
