


# Points, Lines, and Rays


Name each figure.

**Ask Yourself**

- Which letters do I use to name each figure?
- Do I need to write the letters in a certain order?




\_\_\_\_\_



\_\_\_\_\_

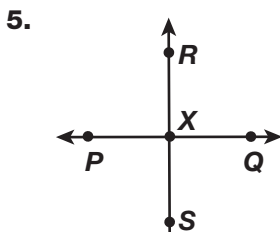


\_\_\_\_\_



\_\_\_\_\_

Describe each pair of lines. Use symbols if possible.



\_\_\_\_\_



\_\_\_\_\_

Draw and label each figure.

7. Ray BC

\_\_\_\_\_

8. Point Q

\_\_\_\_\_

9. Line RT

\_\_\_\_\_

10. Ray AB

\_\_\_\_\_

11. Plane XYZ

\_\_\_\_\_

12. Line segment CD

\_\_\_\_\_

## Problem Solving

13. Line AB is perpendicular to line MN.  
How many right angles are formed  
where the two lines meet?

\_\_\_\_\_

**Show Your Work**