


Points, Lines, and Line Segments

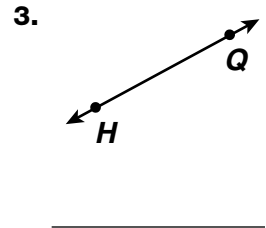
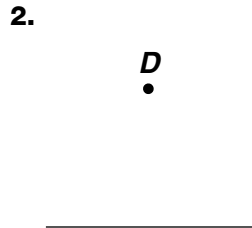
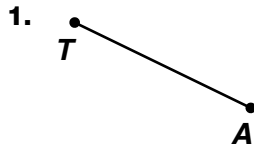
Use words and symbols to name each figure.



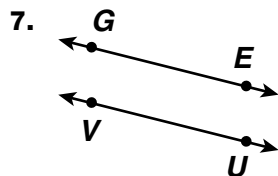
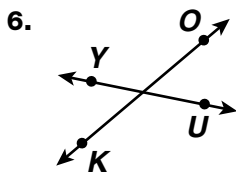
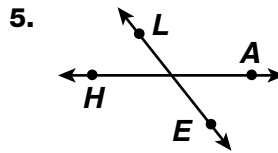
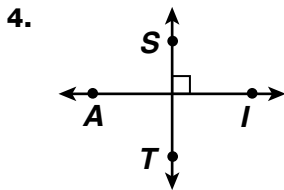
The figure is a line passing through points O and S .

\longleftrightarrow

line OS , OS



Write *parallel*, *intersecting*, or *perpendicular* to best describe the relationship between each pair of lines.



Problem Solving

8. Draw an example of two parallel lines that are intersected by one perpendicular line.