
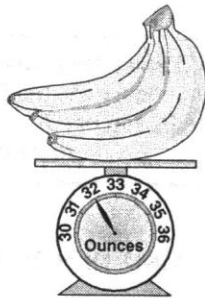



Using Customary Units of Weight

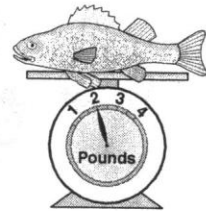
SKILLS

1. How much does the cat weigh in pounds?
2. How much do the bananas weigh in pounds?
3. How much does the rabbit weigh in ounces.
4. How much does the fish weigh in ounces.









5. An elephant weighs 8 tons.
What is the elephant's weight in pounds?
_____ pounds
6. A huge boulder weighs 6,000 pounds.
What is the weight in tons?
_____ tons
7. A humpback whale weighs 29 tons.
What is the weight in pounds?
_____ pounds
8. If you buy a package of steak that weighs 2 pounds, how many ounces is that?
_____ ounces

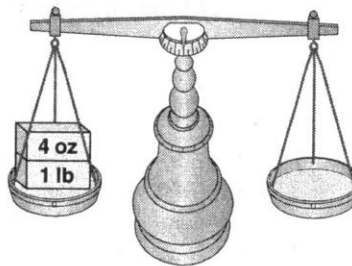
Using Customary Units of Weight

CRITICAL THINKING AND PROBLEM SOLVING

11. Choose the measure that will balance the scale.

2 lb 20 oz 24 oz

Hint: To find the measure needed, think how many ounces are in a pound. There are 16 ounces in a pound. Add the 4 ounces to 16 to get 20 ounces needed to make the sides even.



Choose the measure that will balance the scale.

12.

2 lbs 4 oz		1 lb
▲		
20 oz	2 lb	16 oz

13.

4 T		2 T
▲		
1 T & 1,000 lb	4,000 lb	2,000 lb

14.

86 oz		4 lb
▲		
26 oz	82 oz	22 oz

15.

9,000 lb		2 T
▲		
5 T	5,000 lb	7,000 lb

16. You have 4 boxes of cereal. Each weighs 12 ounces. How many pounds do the boxes weigh?
_____ pounds

17. A tomato weighs about 4 ounces. A basket holds 8 tomatoes. How many pounds does the basket weigh?
_____ pounds

18. A truckload of firewood weighs about 800 pounds. If 5 loads are hauled, how many tons of firewood were hauled?
_____ tons

19. A lion weighs 500 pounds. Does the lion weigh more than a ton?
YES NO

Explain why you think that.
