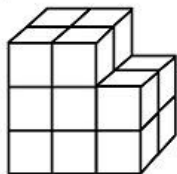


Name: _____

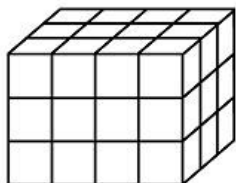
Volume Cubes

Count the cubes and write the volume of each shape.
The first one has been done for you as an example.

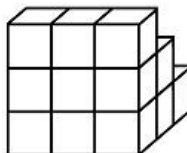
a.



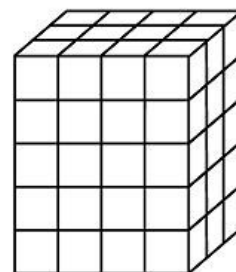
b.



c.

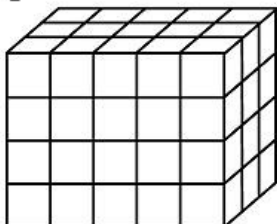


d.

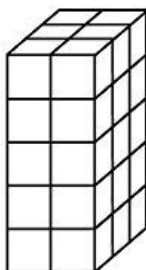


16 cubic units

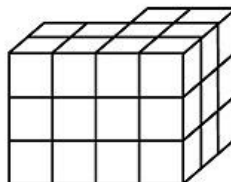
e.



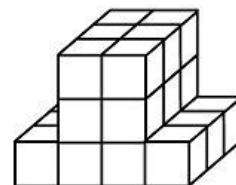
f.



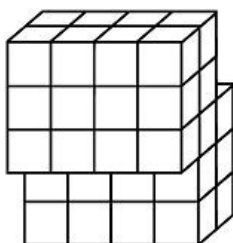
g.



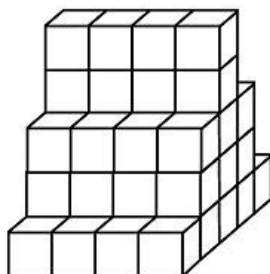
h.



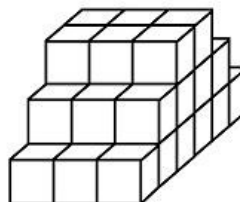
i.



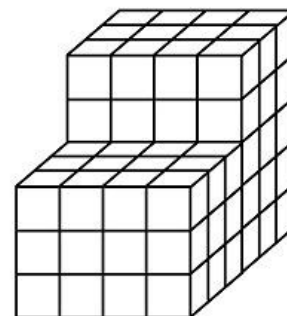
j.



k.



l.

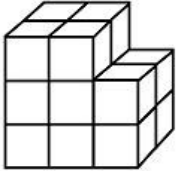


Name: _____

Volume Cubes - ANSWER KEY

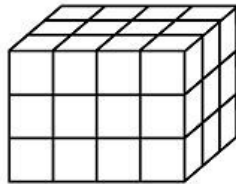
Count the cubes and write the volume of each shape.
The first one has been done for you as an example.

a.



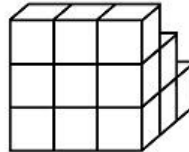
16 cubic units

b.



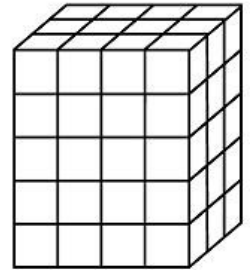
36 cubic units

c.



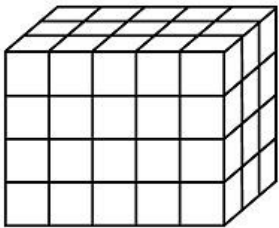
18 cubic units

d.



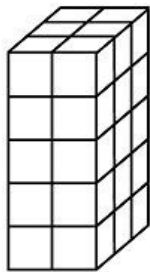
60 cubic units

e.



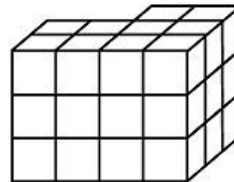
60 cubic units

f.



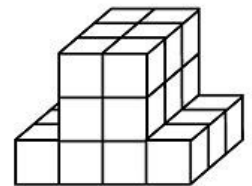
30 cubic units

g.



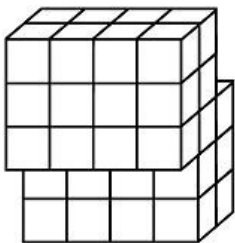
30 cubic units

h.



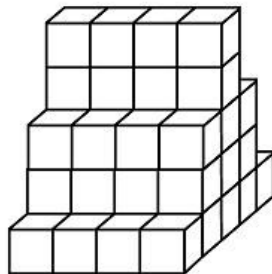
24 cubic units

i.



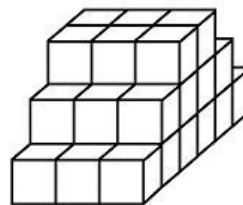
44 cubic units

j.



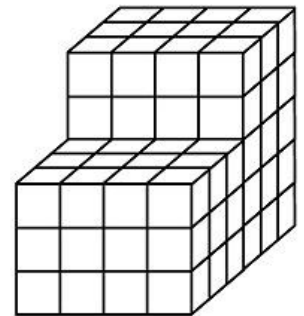
52 cubic units

k.



36 cubic units

l.



96 cubic units