

Name \_\_\_\_\_

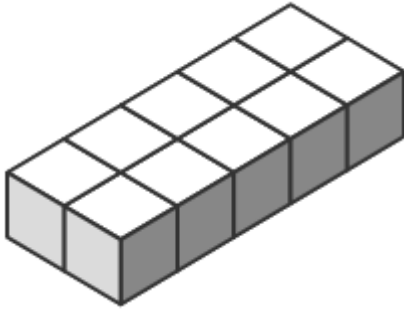
Done Together In Class

### Counting Unit Cubes to Find Volume


Find the volume of each rectangular prism and write it on the line.

Be sure to include the correct units.

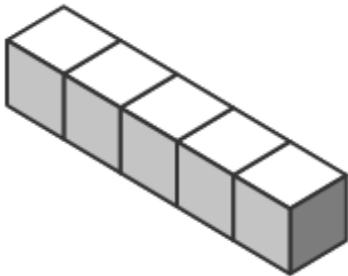
#1 Volume = \_\_\_\_\_



#2 Volume = \_\_\_\_\_



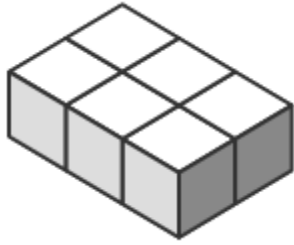
#3 Volume = \_\_\_\_\_




#4 Volume = \_\_\_\_\_




#5 Volume = \_\_\_\_\_



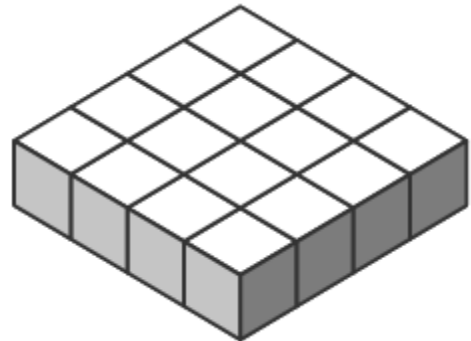
#6 Volume = \_\_\_\_\_



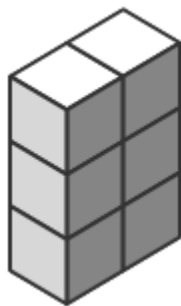
#7 Volume = \_\_\_\_\_




#8 Volume = \_\_\_\_\_



#9 Volume = \_\_\_\_\_



#10 Volume = \_\_\_\_\_



Name \_\_\_\_\_

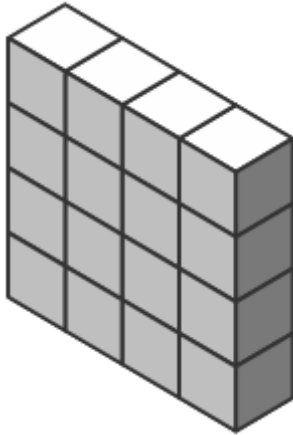
Done With Partners

### Counting Unit Cubes to Find Volume

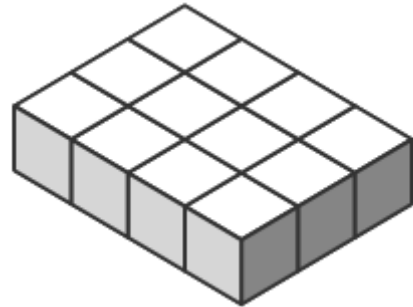
Find the volume of each rectangular prism and write it on the line.

Be sure to include the correct units.

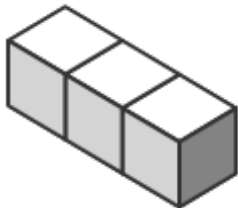
#1 Volume = \_\_\_\_\_



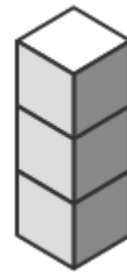
#2 Volume = \_\_\_\_\_




#3 Volume = \_\_\_\_\_



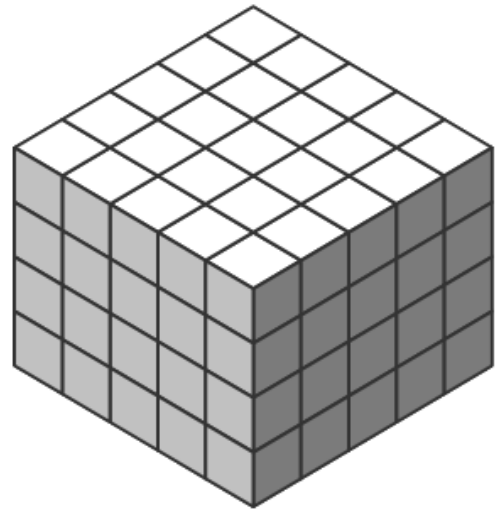
#4 Volume = \_\_\_\_\_




#5 Volume = \_\_\_\_\_




#6 Volume = \_\_\_\_\_



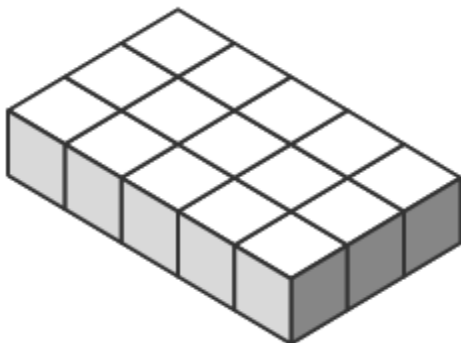
#7 Volume = \_\_\_\_\_



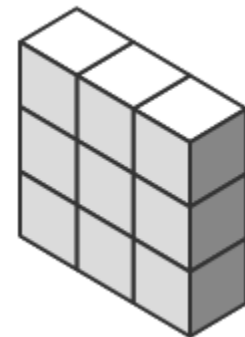
#8 Volume = \_\_\_\_\_



#9 Volume = \_\_\_\_\_



#10 Volume = \_\_\_\_\_




Name \_\_\_\_\_

### Counting Unit Cubes to Find Volume

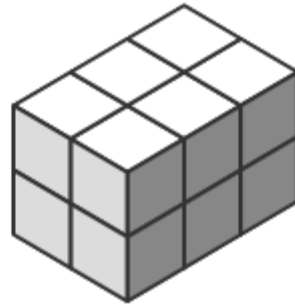
Find the volume of each rectangular prism and write it on the line.

Be sure to include the correct units.

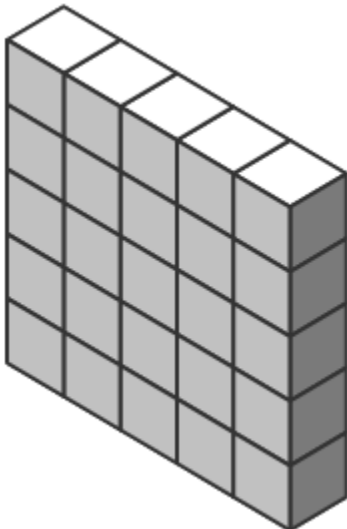
#1 Volume = \_\_\_\_\_




#2 Volume = \_\_\_\_\_



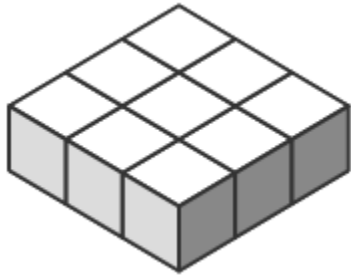
#3 Volume = \_\_\_\_\_



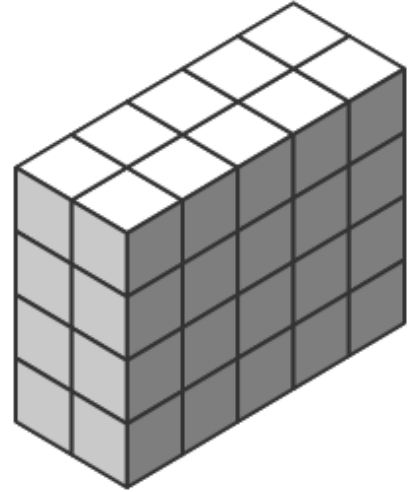
#4 Volume = \_\_\_\_\_



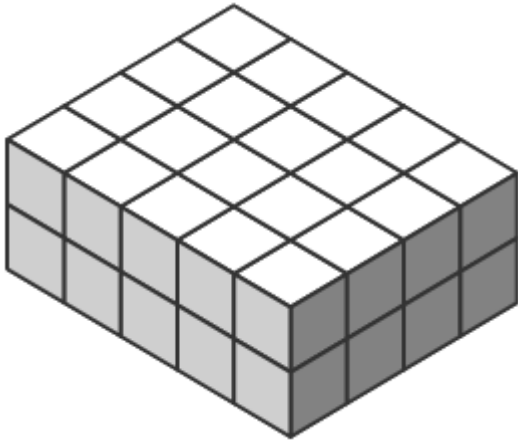
#5 Volume = \_\_\_\_\_




#6 Volume = \_\_\_\_\_



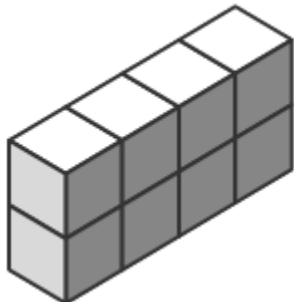
#7 Volume = \_\_\_\_\_




#8 Volume = \_\_\_\_\_



#9 Volume = \_\_\_\_\_



#10 Volume = \_\_\_\_\_



Name \_\_\_\_\_


Homework #1

### Counting Unit Cubes to Find Volume

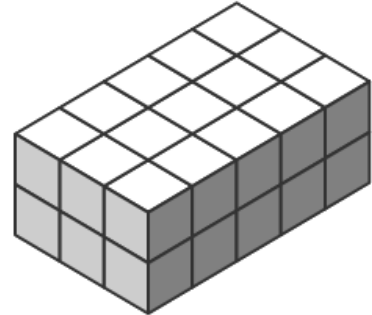
Find the volume of each rectangular prism and write it on the line.

Be sure to include the correct units.


#1 Volume = \_\_\_\_\_



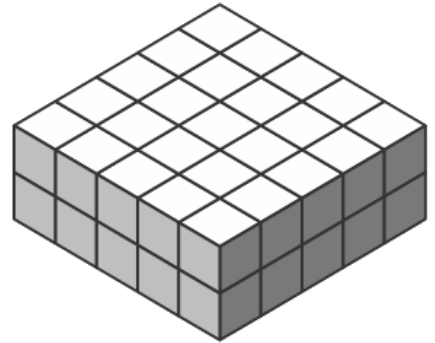
#2 Volume = \_\_\_\_\_




#3 Volume = \_\_\_\_\_



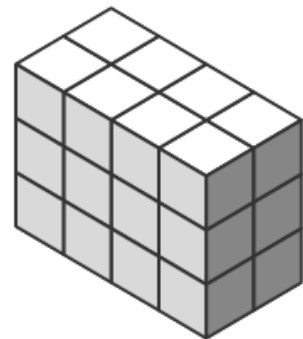
#4 Volume = \_\_\_\_\_




#5 Volume = \_\_\_\_\_



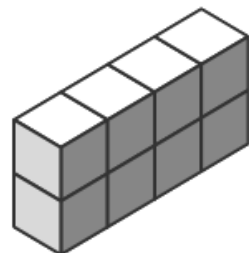
#6 Volume = \_\_\_\_\_



#7 Volume = \_\_\_\_\_



#8 Volume = \_\_\_\_\_



Name \_\_\_\_\_

Homework #2

### Counting Unit Cubes to Find Volume


Find the volume of each rectangular prism and write it on the line.

Be sure to include the correct units.


#1 Volume = \_\_\_\_\_



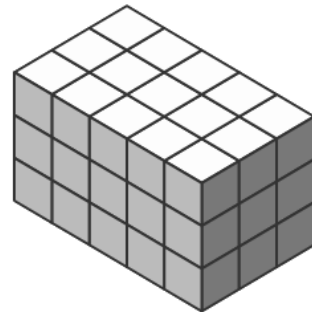
#2 Volume = \_\_\_\_\_




#3 Volume = \_\_\_\_\_



#4 Volume = \_\_\_\_\_



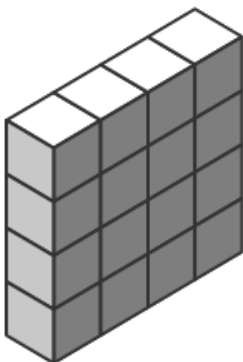
#5 Volume = \_\_\_\_\_



#6 Volume = \_\_\_\_\_



#7 Volume = \_\_\_\_\_



#8 Volume = \_\_\_\_\_

