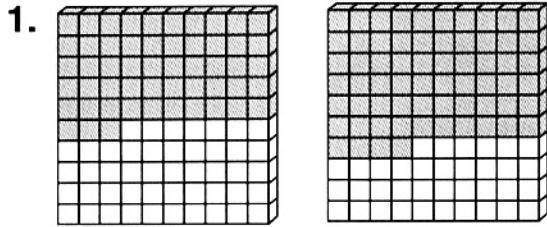


Name _____

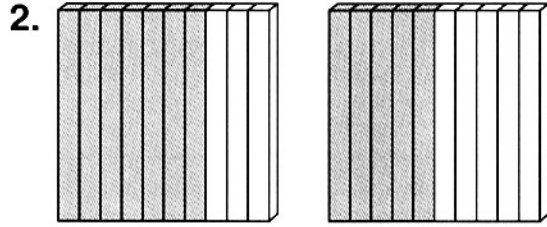
..... **MADE TO ORDER**



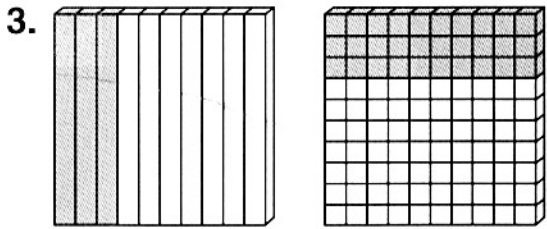
Compare. Write $<$, $>$, or $=$.



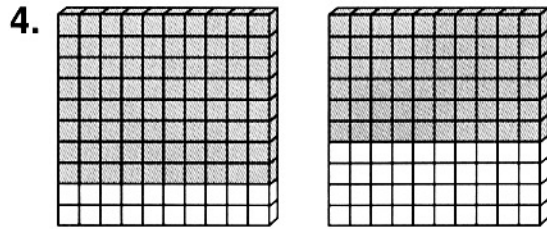
0.53 ○ 0.64



0.7 ○ 0.5



.3 ○ .30



.80 ○ .60

5. 0.8 ○ 0.2

6. 2.26 ○ 2.29

7. 32.54 ○ 32.41

8. 0.18 ○ 0.25

9. 96.30 ○ 96.3

10. 27.18 ○ 27.81

11. 3.07 ○ 2.76

12. 16.9 ○ 17

13. 31.6 ○ 31.60



Order the decimals from greatest to least.

14. 3.5, 0.46, 5.8, 5.62

15. 52.43, 51.75, 51.7, 52.41

Real World Connection



Solve.

16. Pablo orders a hot dog that costs \$1.50 and a drink that costs \$1.05. Which costs more?



Made to Order

Answer Key

1. <
2. >
3. =
4. >
5. >
6. <
7. >
8. <
9. =
10. <
11. >
12. <
13. =
14. 5.8, 5.62, 3.5, 0.46
15. 52.43, 52.41, 51.75, 51.7
16. hot dog

