


Name \_\_\_\_\_

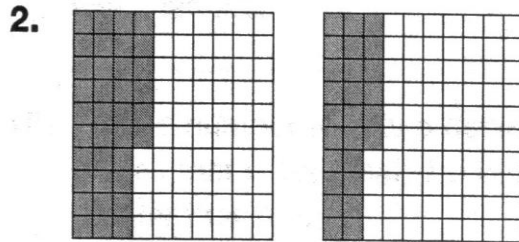
# Comparing and Ordering Decimals Through Hundredths

## SKILLS

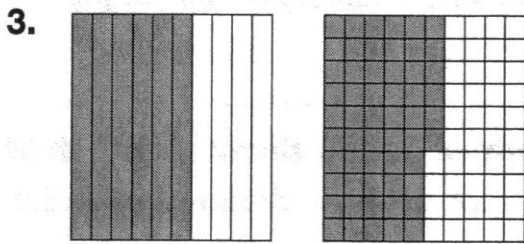
Compare each pair of decimals using  $<$ ,  $>$ , or  $=$ . Use the models to help you.



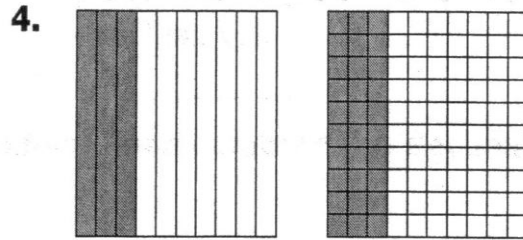
0.43 \_\_\_\_\_ 0.51



0.36 \_\_\_\_\_ 0.26



0.6 \_\_\_\_\_ 0.56



0.3 \_\_\_\_\_ 0.30

Write "is less than," "is equal to," or "is greater than" in each space to compare each pair of decimals.

5. 4.27 \_\_\_\_\_ 4.4

6. 1.16 \_\_\_\_\_ 1.35

7. 3.8 \_\_\_\_\_ 3.80

8. 1.67 \_\_\_\_\_ 1.57

9. 2 \_\_\_\_\_ 1.48

10. 2.6 \_\_\_\_\_ 2.59

11. 1 \_\_\_\_\_ 1.0

12. 2.15 \_\_\_\_\_ 2.2