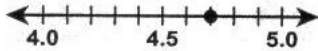


Rounding Decimals Through Hundredths

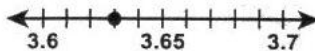
SKILLS

1. Round 4.7 to the nearest whole number.



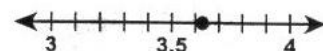
4.7 rounds to _____.

2. Round 3.63 to the nearest tenth.



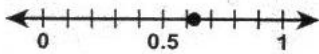
3.63 rounds to _____.

3. Round 3.63 to the nearest whole number.




3.63 rounds to _____.

4. Round 0.63 to the nearest whole number.



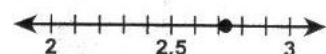
0.63 rounds to _____.

5. Round 0.63 to the nearest tenth.



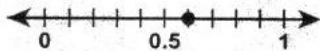
0.63 rounds to _____.

6. Round 2.73 to the nearest whole number.




2.73 rounds to _____.

7. Round 0.6 to the nearest whole number.



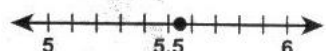
0.6 rounds to _____.

8. Round 4.24 to the nearest whole number.




4.24 rounds to _____.

9. Round 5.55 to the nearest whole number.




5.55 rounds to _____.

10. Round 7.81 to the nearest tenth.



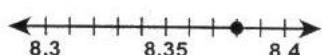
7.81 rounds to _____.

11. Round 0.48 to the nearest tenth.




0.48 rounds to _____.

12. Round 8.38 to the nearest tenth.




8.38 rounds to _____.

13. Round 8.72 to the nearest tenth.



8.72 rounds to _____.

14. Round 9.61 to the nearest whole number.



9.61 rounds to _____.

15. Round 1.5 to the nearest whole number.



1.5 rounds to _____.