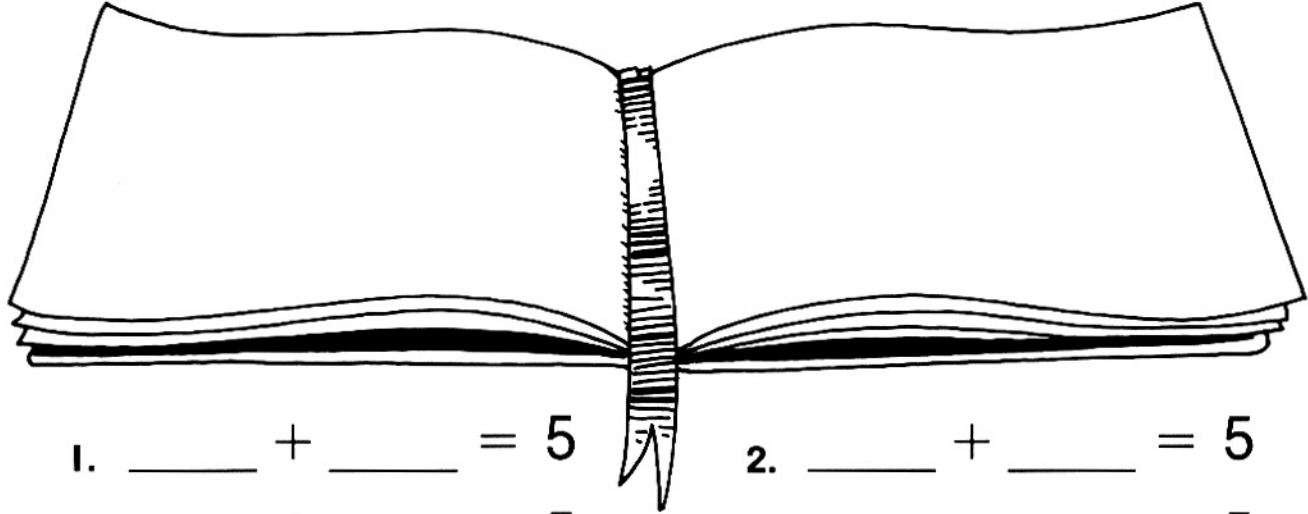


Name \_\_\_\_\_

## More Addition Combinations

Put in .

Find ways to make the sums.



1. \_\_\_\_\_ + \_\_\_\_\_ = 5

2. \_\_\_\_\_ + \_\_\_\_\_ = 5

3. \_\_\_\_\_ + \_\_\_\_\_ = 5

4. \_\_\_\_\_ + \_\_\_\_\_ = 5

5. \_\_\_\_\_ + \_\_\_\_\_ = 5

6. \_\_\_\_\_ + \_\_\_\_\_ = 5

---

7. \_\_\_\_\_ + \_\_\_\_\_ = 6

8. \_\_\_\_\_ + \_\_\_\_\_ = 6

9. \_\_\_\_\_ + \_\_\_\_\_ = 6

10. \_\_\_\_\_ + \_\_\_\_\_ = 6

11. \_\_\_\_\_ + \_\_\_\_\_ = 6

12. \_\_\_\_\_ + \_\_\_\_\_ = 6

13. \_\_\_\_\_ + \_\_\_\_\_ = 6

---

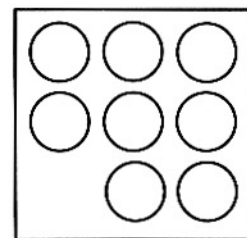
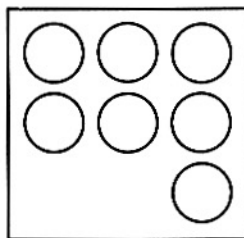
### Reasoning

14. Do both groups have the same number?

Ring **Yes** or **No**.

Yes

No



# More Addition Combinations

## Answer Key

---

Note: The order of responses for 1.–6. and for 7.–13. will vary.

1.  $2 + 3$
2.  $3 + 2$
3.  $1 + 4$
4.  $4 + 1$
5.  $0 + 5$
6.  $5 + 0$
7.  $2 + 4$
8.  $4 + 2$
9.  $1 + 5$
10.  $5 + 1$
11.  $0 + 6$
12.  $6 + 0$
13.  $3 + 3$
14. No

