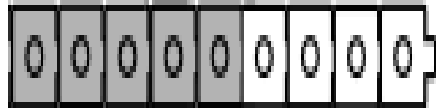


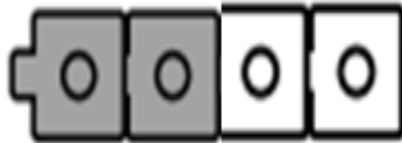
Complete each number sentence.

Picture A



$$\boxed{} + \boxed{} = 9$$

Picture B



$$\boxed{} + \boxed{} = 4$$

Picture C



$$4 = \boxed{} + \boxed{}$$

Picture D



$$9 = \boxed{} + \boxed{}$$

Draw a picture to represent the number sentences that are shown.
Use linking cubes in your drawing.


Picture E

$$\boxed{2} + \boxed{5} = 7$$

Picture F


$$8 = \boxed{2} + \boxed{6}$$

Picture G




$$\square + \square = 10$$

Picture H




$$10 = \square + \square$$

Picture I



$$\square + \square = 10$$

Picture J



$$10 = \square + \square$$

Draw a picture to represent the number sentences that are shown.
Use tens frames in your drawing.

Picture K

$$6 = 3 + 3$$

Picture L

$$4 + 2 = 6$$