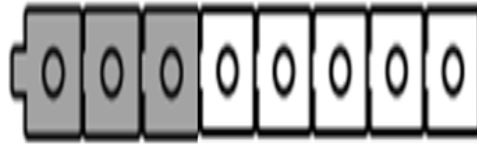


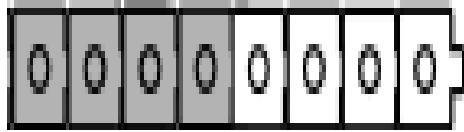
Complete each number sentence.

Picture A



$$\boxed{} + \boxed{} = 8$$

Picture B




$$8 = \boxed{} + \boxed{}$$

Picture C



$$6 = \boxed{} + \boxed{}$$

Picture D



$$6 = \boxed{} + \boxed{}$$

Draw a picture to represent the number sentences that are shown.
Use linking cubes in your drawing.

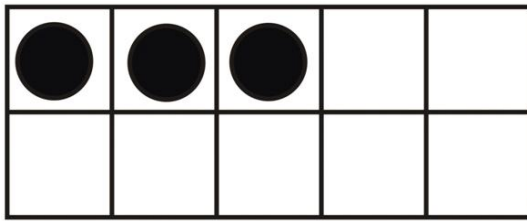
Picture E

$$7 = \boxed{5} + \boxed{2}$$

Picture F


$$\boxed{1} + \boxed{6} = 7$$

Picture G




$$\boxed{} + \boxed{} = 10$$

Picture H




$$10 = \boxed{} + \boxed{}$$

Picture I



$$10 = \boxed{} + \boxed{}$$

Picture J



$$\boxed{} + \boxed{} = 10$$

Draw a picture to represent the number sentences that are shown.
Use tens frames in your drawing.

Picture K

$$\boxed{4} + \boxed{5} = 9$$

Picture L

$$9 = \boxed{3} + \boxed{6}$$